

## CHAPTER IV. HYPERBOLIC FUNCTIONS.

By JAMES McMAHON,

Assistant Professor of Mathematics in Cornell University.

### ART. 1. CORRESPONDENCE OF POINTS ON CONICS.

To prepare the way for a general treatment of the hyperbolic functions a preliminary discussion is given on the relations between hyperbolic sectors. The method adopted is such as to apply at the same time to sectors of the ellipse, including the circle; and the analogy of the hyperbolic and circular functions will be obvious at every step, since the same set of equations can be read in connection with either the hyperbola or the ellipse.\* It is convenient to begin with the theory of correspondence of points on two central conics of like species, i.e. either both ellipses or both hyperbolas.

To obtain a definition of corresponding points, let  $O_1A_1$ ,  $O_1B_1$  be conjugate radii of a central conic, and  $O_2A_2$ ,  $O_2B_2$  conjugate radii of any other central conic of the same species; let  $P_1$ ,  $P_2$  be two points on the curves; and let their coordinates referred to the respective pairs of conjugate directions be  $(x_1, y_1)$ ,  $(x_2, y_2)$ ; then, by analytic geometry,

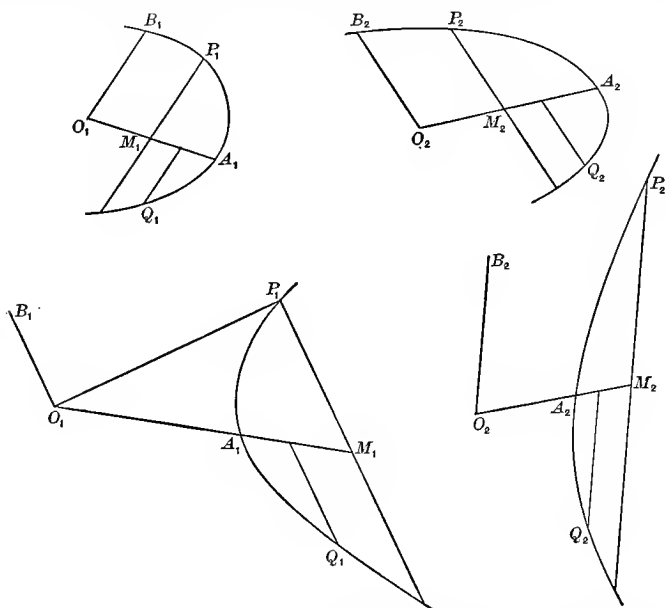
$$\frac{x_1^2}{a_1^2} \pm \frac{y_1^2}{b_1^2} = 1, \quad \frac{x_2^2}{a_2^2} \pm \frac{y_2^2}{b_2^2} = 1. \quad (1)$$

\* The hyperbolic functions are not so named on account of any analogy with what are termed Elliptic Functions. "The elliptic integrals, and thence the elliptic functions, derive their name from the early attempts of mathematicians at the rectification of the ellipse. . . . To a certain extent this is a disadvantage; . . . because we employ the name hyperbolic function to denote  $\cosh u$ ,  $\sinh u$ , etc., by analogy with which the elliptic functions would be merely the circular functions  $\cos \phi$ ,  $\sin \phi$ , etc. . . ." (Greenhill, *Elliptic Functions*, p. 175.)

Now if the points  $P_1, P_2$  be so situated that

$$\frac{x_1}{a_1} = \frac{x_2}{a_2}, \quad \frac{y_1}{b_1} = \frac{y_2}{b_2}, \quad (2)$$

the equalities referring to sign as well as magnitude, then  $P_1, P_2$  are called corresponding points in the two systems. If  $Q_1, Q_2$  be another pair of correspondents, then the sector and tri-



angle  $P_1O_1Q_1$  are said to correspond respectively with the sector and triangle  $P_2O_2Q_2$ . These definitions will apply also when the conics coincide, the points  $P_1, P_2$  being then referred to any two pairs of conjugate diameters of the same conic.

In discussing the relations between corresponding areas it is convenient to adopt the following use of the word "measure": The measure of any area connected with a given central conic is the ratio which it bears to the constant area of the triangle formed by two conjugate diameters of the same conic.

For example, the measure of the sector  $A_1O_1P_1$  is the ratio

$$\frac{\text{sector } A_1O_1P_1}{\text{triangle } A_1O_1B_1}$$

and is to be regarded as positive or negative according as  $A_1O_1P_1$  and  $A_1O_1B_1$  are at the same or opposite sides of their common initial line.

### ART. 2. AREAS OF CORRESPONDING TRIANGLES.

The areas of corresponding triangles have equal measures. For, let the coordinates of  $P_1, Q_1$  be  $(x_1, y_1), (x_1', y_1')$ , and let those of their correspondents  $P_2, Q_2$  be  $(x_2, y_2), (x_2', y_2')$ ; let the triangles  $P_1O_1Q_1, P_2O_2Q_2$  be  $T_1, T_2$ , and let the measuring triangles  $A_1O_1B_1, A_2O_2B_2$  be  $K_1, K_2$ , and their angles  $\omega_1, \omega_2$ ; then, by analytic geometry, taking account of both magnitude and direction of angles, areas, and lines,

$$\frac{T_1}{K_1} = \frac{\frac{1}{2}(x_1y_1' - x_1'y_1) \sin \omega_1}{\frac{1}{2}a_1b_1 \sin \omega_1} = \frac{x_1}{a_1} \frac{y_1'}{b_1} - \frac{x_1'y_1}{a_1 b_1},$$

$$\frac{T_2}{K_2} = \frac{\frac{1}{2}(x_2y_2' - x_2'y_2) \sin \omega_2}{\frac{1}{2}a_2b_2 \sin \omega_2} = \frac{x_2}{a_2} \frac{y_2'}{b_2} - \frac{x_2'y_2}{a_2 b_2}.$$

Therefore 
$$\frac{T_1}{K_1} = \frac{T_2}{K_2}. \quad (3)$$

### ART. 3. AREAS OF CORRESPONDING SECTORS.

The areas of corresponding sectors have equal measures. For conceive the sectors  $S_1, S_2$  divided up into infinitesimal corresponding sectors; then the respective infinitesimal corresponding triangles have equal measures (Art. 2); but the given sectors are the limits of the sums of these infinitesimal triangles, hence

$$\frac{S_1}{K_1} = \frac{S_2}{K_2}. \quad (4)$$

In particular, the sectors  $A_1O_1P_1, A_2O_2P_2$  have equal measures; for the initial points  $A_1, A_2$  are corresponding points.

It may be proved conversely by an obvious *reductio ad absurdum* that if the initial points of two equal-measured sectors correspond, then their terminal points correspond.

Thus if any radii  $O_1A_1, O_2A_2$  be the initial lines of two equal-measured sectors whose terminal radii are  $O_1P_1, O_2P_2$ ,

then  $P_1, P_2$  are corresponding points referred respectively to the pairs of conjugate directions  $O_1A_1, O_1B_1$ , and  $O_2A_2, O_2B_2$ ; that is,

$$\frac{x_1}{a_1} = \frac{x_2}{a_2}, \quad \frac{y_1}{b_1} = \frac{y_2}{b_2}.$$

Prob. 1. Prove that the sector  $P_1O_1Q_1$  is bisected by the line joining  $O_1$  to the mid-point of  $P_1Q_1$ . (Refer the points  $P_1, Q_1$ , respectively, to the median as common axis of  $x$ , and to the two opposite conjugate directions as axis of  $y$ , and show that  $P_1, Q_1$  are then corresponding points.)

Prob. 2. Prove that the measure of a circular sector is equal to the radian measure of its angle.

Prob. 3. Find the measure of an elliptic quadrant, and of the sector included by conjugate radii.

#### ART. 4. CHARACTERISTIC RATIOS OF SECTORIAL MEASURES.

Let  $A_1O_1P_1 = S_1$  be any sector of a central conic; draw  $P_1M_1$  ordinate to  $O_1A_1$ , i.e. parallel to the tangent at  $A_1$ ; let  $O_1M_1 = x_1, M_1P_1 = y_1, O_1A_1 = a_1$ , and the conjugate radius  $O_1B_1 = b_1$ ; then the ratios  $x_1/a_1, y_1/b_1$  are called the characteristic ratios of the given sectorial measure  $S_1/K_1$ . These ratios are constant both in magnitude and sign for all sectors of the same measure and species wherever these may be situated (Art. 3). Hence there exists a functional relation between the sectorial measure and each of its characteristic ratios.

#### ART. 5. RATIOS EXPRESSED AS TRIANGLE-MEASURES.

The triangle of a sector and its complementary triangle are measured by the two characteristic ratios. For, let the triangle  $A_1O_1P_1$  and its complementary triangle  $P_1O_1B_1$  be denoted by  $T_1, T_1'$ ; then

$$\left. \begin{aligned} \frac{T_1}{K_1} &= \frac{\frac{1}{2}a_1y_1 \sin \omega_1}{\frac{1}{2}a_1b_1 \sin \omega_1} = \frac{y_1}{b_1}, \\ \frac{T_1'}{K_1} &= \frac{\frac{1}{2}b_1x_1 \sin \omega_1}{\frac{1}{2}a_1b_1 \sin \omega_1} = \frac{x_1}{a_1}. \end{aligned} \right\} \quad (5)$$

## ART. 6. FUNCTIONAL RELATIONS FOR ELLIPSE.

The functional relations that exist between the sectorial measure and each of its characteristic ratios are the same for all elliptic, including circular, sectors (Art. 4). Let  $P_1$ ,  $P_2$  be corresponding points on an ellipse and a circle, referred to the conjugate directions  $O_1A_1$ ,  $O_1B_1$ , and  $O_2A_2$ ,  $O_2B_2$ , the latter pair being at right angles; let the angle  $A_2O_2P_2 = \theta$  in radian measure; then

$$\frac{S_2}{K_2} = \frac{\frac{1}{2}a_2^2\theta}{\frac{1}{2}a_2^2} = \theta. \quad (6)$$

$$\therefore \frac{x_2}{a_2} = \cos \frac{S_2}{K_2}, \quad \frac{y_2}{b_2} = \sin \frac{S_2}{K_2}; \quad [a_2 = b_2]$$

hence, in the ellipse, by Art. 3,

$$\frac{x_1}{a_1} = \cos \frac{S_1}{K_1}, \quad \frac{y_1}{b_1} = \sin \frac{S_1}{K_1}. \quad (7)$$

Prob. 4. Given  $x_1 = \frac{1}{2}a_1$ ; find the measure of the elliptic sector  $A_1O_1P_1$ . Also find its area when  $a_1 = 4$ ,  $b_1 = 3$ ,  $\omega = 60^\circ$ .

Prob. 5. Find the characteristic ratios of an elliptic sector whose measure is  $\frac{1}{4}\pi$ .

Prob. 6. Write down the relation between an elliptic sector and its triangle. (See Art. 5.)

## ART. 7. FUNCTIONAL RELATIONS FOR HYPERBOLA.

The functional relations between a sectorial measure and its characteristic ratios in the case of the hyperbola may be written in the form

$$\frac{x_1}{a_1} = \cosh \frac{S_1}{K_1}, \quad \frac{y_1}{b_1} = \sinh \frac{S_1}{K_1};$$

and these express that the ratio of the two lines on the left is a certain definite function of the ratio of the two areas on the right. These functions are called by analogy the hyperbolic

cosine and the hyperbolic sine. Thus, writing  $u$  for  $S_i/K_1$ , the two equations

$$\frac{x_1}{a_1} = \cosh u, \quad \frac{y_1}{b_1} = \sinh u \quad (8)$$

serve to define the hyperbolic cosine and sine of a given sectorial measure  $u$ ; and the hyperbolic tangent, cotangent, secant, and cosecant are then defined as follows:

$$\left. \begin{aligned} \tanh u &= \frac{\sinh u}{\cosh u}, & \coth u &= \frac{\cosh u}{\sinh u}, \\ \operatorname{sech} u &= \frac{1}{\cosh u}, & \operatorname{csch} u &= \frac{1}{\sinh u}. \end{aligned} \right\} \quad (9)$$

The names of these functions may be read "h-cosine," "h-sine," "h-tangent," etc.

#### ART. 8. RELATIONS BETWEEN HYPERBOLIC FUNCTIONS.

Among the six functions there are five independent relations, so that when the numerical value of one of the functions is given, the values of the other five can be found. Four of these relations consist of the four defining equations (9). The fifth is derived from the equation of the hyperbola

$$\frac{x_1^2}{a_1^2} - \frac{y_1^2}{b_1^2} = 1,$$

giving

$$\cosh^2 u - \sinh^2 u = 1. \quad (10)$$

By a combination of some of these equations other subsidiary relations may be obtained; thus, dividing (10) successively by  $\cosh^2 u$ ,  $\sinh^2 u$ , and applying (9), give

$$\left. \begin{aligned} 1 - \tanh^2 u &= \operatorname{sech}^2 u, \\ \coth^2 u - 1 &= \operatorname{csch}^2 u. \end{aligned} \right\} \quad (11)$$

Equations (9), (10), (11) will readily serve to express the value of any function in terms of any other. For example, when  $\tanh u$  is given,

$$\coth u = \frac{1}{\tanh u}, \quad \operatorname{sech} u = \sqrt{1 - \tanh^2 u},$$

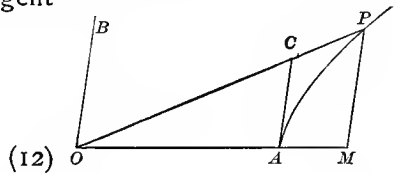
$$\cosh u = \frac{1}{\sqrt{1 - \tanh^2 u}}, \quad \sinh u = \frac{\tanh u}{\sqrt{1 - \tanh^2 u}},$$

$$\operatorname{csch} u = \frac{\sqrt{1 - \tanh^2 u}}{\tanh u}.$$

The ambiguity in the sign of the square root may usually be removed by the following considerations: The functions  $\cosh u$ ,  $\operatorname{sech} u$  are always positive, because the primary characteristic ratio  $x_1/a_1$  is positive, since the initial line  $O_1A_1$  and the abscissa  $O_1M_1$  are similarly directed from  $O_1$ , on whichever branch of the hyperbola  $P_1$  may be situated; but the functions  $\sinh u$ ,  $\tanh u$ ,  $\operatorname{coth} u$ ,  $\operatorname{csch} u$ , involve the other characteristic ratio  $y_1/b_1$ , which is positive or negative according as  $y_1$  and  $b_1$  have the same or opposite signs, i.e., as the measure  $u$  is positive or negative; hence these four functions are either all positive or all negative. Thus when any one of the functions  $\sinh u$ ,  $\tanh u$ ,  $\operatorname{csch} u$ ,  $\operatorname{coth} u$ , is given in magnitude and sign, there is no ambiguity in the value of any of the six hyperbolic functions; but when either  $\cosh u$  or  $\operatorname{sech} u$  is given, there is ambiguity as to whether the other four functions shall be all positive or all negative.

The hyperbolic tangent may be expressed as the ratio of two lines. For draw the tangent line  $AC = t$ ; then

$$\begin{aligned} \tanh u &= \frac{y}{b} : \frac{x}{a} = \frac{a}{b} \cdot \frac{y}{x} \\ &= \frac{a}{b} \cdot \frac{t}{a} = \frac{t}{b}. \end{aligned}$$



The hyperbolic tangent is the measure of the triangle  $OAC$ . For

$$\frac{OAC}{OAB} = \frac{at}{ab} = \frac{t}{b} = \tanh u. \quad (13)$$

Thus the sector  $AOP$ , and the triangles  $AOP$ ,  $POB$ ,  $AOC$ , are proportional to  $u$ ,  $\sinh u$ ,  $\cosh u$ ,  $\tanh u$  (eqs. 5, 13); hence

$$\sinh u > u > \tanh u. \quad (14)$$

Prob. 7. Express all the hyperbolic functions in terms of  $\sinh u$ . Given  $\cosh u = 2$ , find the values of the other functions.

Prob. 8. Prove from eqs. 10, 11, that  $\cosh u > \sinh u$ ,  $\cosh u > 1$ ,  $\tanh u < 1$ ,  $\operatorname{sech} u < 1$ .

Prob. 9. In the figure of Art. 1, let  $OA=2$ ,  $OB=1$ ,  $AOB = 60^\circ$ , and area of sector  $AOP = 3$ ; find the sectorial measure, and the two characteristic ratios, in the elliptic sector, and also in the hyperbolic sector; and find the area of the triangle  $AOP$ . (Use tables of  $\cos$ ,  $\sin$ ,  $\cosh$ ,  $\sinh$ .)

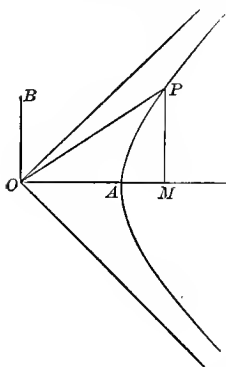
Prob. 10. Show that  $\coth u$ ,  $\operatorname{sech} u$ ,  $\operatorname{csch} u$  may each be expressed as the ratio of two lines, as follows: Let the tangent at  $P$  make on the conjugate axes  $OA$ ,  $OB$ , intercepts  $OS = m$ ,  $OT = n$ ; let the tangent at  $B$ , to the conjugate hyperbola, meet  $OP$  in  $R$ , making  $BR = l$ ; then

$$\coth u = l/a, \quad \operatorname{sech} u = m/a, \quad \operatorname{csch} u = n/b.$$

Prob. 11. The measure of segment  $AMP$  is  $\sinh u \cosh u - u$ . Modify this for the ellipse. Modify also eqs. 10-14, and probs. 8, 10.

#### ART. 9. VARIATIONS OF THE HYPERBOLIC FUNCTIONS.

Since the values of the hyperbolic functions depend only on the sectorial measure, it is convenient, in tracing their variations, to consider only sectors of one half of a rectangular hyperbola, whose conjugate radii are equal, and to take the principal axis  $OA$  as the common initial line of all the sectors. The sectorial measure  $u$  assumes every value from  $-\infty$ , through 0, to  $+\infty$ , as the terminal point  $P$  comes in from infinity on the lower branch, and passes to infinity on the upper branch; that is, as the terminal line  $OP$  swings from the lower asymptotic position  $y = -x$ , to the upper one,  $y = x$ . It is here assumed, but is proved in Art. 17, that the sector  $AOP$  becomes infinite as  $P$  passes to infinity.



Since the functions  $\cosh u$ ,  $\sinh u$ ,  $\tanh u$ , for any position



of  $OP_1$ , are equal to the ratios of  $x, y, t$ , to the principal radius  $a$ , it is evident from the figure that

$$\cosh 0 = 1, \quad \sinh 0 = 0, \quad \tanh 0 = 0, \quad (15)$$

and that as  $u$  increases towards positive infinity,  $\cosh u, \sinh u$  are positive and become infinite, but  $\tanh u$  approaches unity as a limit; thus

$$\cosh \infty = \infty, \quad \sinh \infty = \infty, \quad \tanh \infty = 1. \quad (16)$$

Again, as  $u$  changes from zero towards the negative side,  $\cosh u$  is positive and increases from unity to infinity, but  $\sinh u$  is negative and increases numerically from zero to a negative infinite, and  $\tanh u$  is also negative and increases numerically from zero to negative unity; hence

$$\cosh(-\infty) = \infty, \quad \sinh(-\infty) = -\infty, \quad \tanh(-\infty) = -1. \quad (17)$$

For intermediate values of  $u$  the numerical values of these functions can be found from the formulas of Arts. 16, 17, and are tabulated at the end of this chapter. A general idea of their manner of variation can be obtained from the curves in Art. 25, in which the sectorial measure  $u$  is represented by the abscissa, and the values of the functions  $\cosh u, \sinh u$ , etc., are represented by the ordinate.

The relations between the functions of  $-u$  and of  $u$  are evident from the definitions, as indicated above, and in Art. 8. Thus

$$\left. \begin{aligned} \cosh(-u) &= +\cosh u, & \sinh(-u) &= -\sinh u, \\ \operatorname{sech}(-u) &= +\operatorname{sech} u, & \operatorname{csch}(-u) &= -\operatorname{csch} u, \\ \tanh(-u) &= -\tanh u, & \operatorname{coth}(-u) &= -\operatorname{coth} u. \end{aligned} \right\} \quad (18)$$

Prob. 12. Trace the changes in  $\operatorname{sech} u, \operatorname{coth} u, \operatorname{csch} u$ , as  $u$  passes from  $-\infty$  to  $+\infty$ . Show that  $\sinh u, \cosh u$  are infinities of the same order when  $u$  is infinite. (It will appear in Art. 17 that  $\sinh u, \cosh u$  are infinities of an order infinitely higher than the order of  $u$ .)

Prob. 13. Applying eq. (12) to figure, page 114, prove  $\tanh u = \tan AOP$ .

## ART. 10. ANTI-HYPERBOLIC FUNCTIONS.

The equations  $\frac{x}{a} = \cosh u$ ,  $\frac{y}{b} = \sinh u$ ,  $\frac{t}{b} = \tanh u$ , etc., may also be expressed by the inverse notation  $u = \cosh^{-1} \frac{x}{a}$ ,  $u = \sinh^{-1} \frac{y}{b}$ ,  $u = \tanh^{-1} \frac{t}{b}$ , etc., which may be read: “ $u$  is the sectorial measure whose hyperbolic cosine is the ratio  $x$  to  $a$ ,” etc.; or “ $u$  is the anti-h-cosine of  $x/a$ ,” etc.

Since there are two values of  $u$ , with opposite signs, that correspond to a given value of  $\cosh u$ , it follows that if  $u$  be determined from the equation  $\cosh u = m$ , where  $m$  is a given number greater than unity,  $u$  is a two-valued function of  $m$ . The symbol  $\cosh^{-1} m$  will be used to denote the positive value of  $u$  that satisfies the equation  $\cosh u = m$ . Similarly the symbol  $\operatorname{sech}^{-1} m$  will stand for the positive value of  $u$  that satisfies the equation  $\operatorname{sech} u = m$ . The signs of the other functions  $\sinh^{-1} m$ ,  $\tanh^{-1} m$ ,  $\operatorname{coth}^{-1} m$ ,  $\operatorname{csch}^{-1} m$ , are the same as the sign of  $m$ . Hence all of the anti-hyperbolic functions of real numbers are one-valued.

Prob. 14. Prove the following relations:

$$\cosh^{-1} m = \sinh^{-1} \sqrt{m^2 - 1}, \quad \sinh^{-1} m = \pm \cosh^{-1} \sqrt{m^2 + 1},$$

the upper or lower sign being used according as  $m$  is positive or negative. Modify these relations for  $\sin^{-1}$ ,  $\cos^{-1}$ .

Prob. 15. In figure, Art. 1, let  $OA = 2$ ,  $OB = 1$ ,  $AOB = 60^\circ$ ; find the area of the hyperbolic sector  $AOP$ , and of the segment  $AMP$ , if the abscissa of  $P$  is 3. (Find  $\cosh^{-1}$  from the tables for  $\cosh$ .)

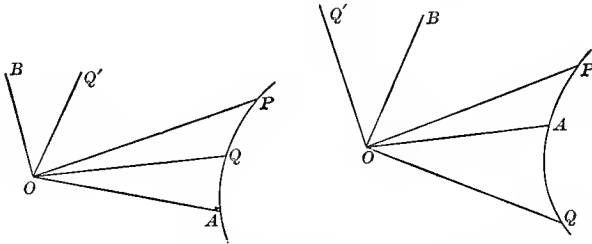
## ART. 11. FUNCTIONS OF SUMS AND DIFFERENCES.

(a) To prove the difference-formulas

$$\left. \begin{aligned} \sinh(u - v) &= \sinh u \cosh v - \cosh u \sinh v, \\ \cosh(u - v) &= \cosh u \cosh v - \sinh u \sinh v. \end{aligned} \right\} \quad (19)$$

Let  $OA$  be any radius of a hyperbola, and let the sectors  $AOP$ ,  $AOQ$  have the measures  $u$ ,  $v$ ; then  $u - v$  is the measure of the sector  $QOP$ . Let  $OB$ ,  $OQ'$  be the radii conjugate to  $OA$ ,  $OQ$ ; and let the coördinates of  $P$ ,  $Q$ ,  $Q'$  be  $(x_1, y_1)$ ,  $(x, y)$ ,  $(x', y')$  with reference to the axes  $OA$ ,  $OB$ ; then

$$\begin{aligned} \sinh(u - v) &= \sinh \frac{\text{sector } QOP}{K} = \frac{\text{triangle } QOP}{K} \quad [\text{Art. 5.}] \\ &= \frac{\frac{1}{2}(xy_1 - x_1y) \sin \omega}{\frac{1}{2}a_1b_1 \sin \omega} = \frac{y_1x}{b_1a_1} - \frac{yx_1}{b_1a_1} \\ &= \sinh u \cosh v - \cosh u \sinh v; \end{aligned}$$



$$\begin{aligned} \cosh(u - v) &= \cosh \frac{\text{sector } QOP}{K} = \frac{\text{triangle } POQ'}{K} \quad [\text{Art. 5.}] \\ &= \frac{\frac{1}{2}(xy_1' - y_1x') \sin \omega}{\frac{1}{2}a_1b_1 \sin \omega} = \frac{y_1'x_1}{b_1a_1} - \frac{y_1x_1'}{b_1a_1}; \end{aligned}$$

but 
$$\frac{y_1'}{b_1} = \frac{x}{a_1}, \quad \frac{x_1'}{a_1} = \frac{y}{b_1}, \quad (20)$$

since  $Q, Q'$  are extremities of conjugate radii; hence

$$\cosh(u - v) = \cosh u \cosh v - \sinh u \sinh v.$$

In the figures  $u$  is positive and  $v$  is positive or negative. Other figures may be drawn with  $u$  negative, and the language in the text will apply to all. In the case of elliptic sectors, similar figures may be drawn, and the same language will apply, except that the second equation of (20) will be  $x'/a_1 = -y/b_1$ ; therefore

$$\begin{aligned} \sin(u - v) &= \sin u \cos v - \cos u \sin v, \\ \cos(u - v) &= \cos u \cos v + \sin u \sin v. \end{aligned}$$

(b) To prove the sum-formulas

$$\left. \begin{aligned} \sinh(u + v) &= \sinh u \cosh v + \cosh u \sinh v, \\ \cosh(u + v) &= \cosh u \cosh v + \sinh u \sinh v. \end{aligned} \right\} \quad (21)$$

These equations follow from (19) by changing  $v$  into  $-v$ ,

and then for  $\sinh(-v)$ ,  $\cosh(-v)$ , writing  $-\sinh v$ ,  $\cosh v$  (Art. 9, eqs. (18)).

$$(c) \text{ To prove that } \tanh(u \pm v) = \frac{\tanh u \pm \tanh v}{1 \pm \tanh u \tanh v}. \quad (22)$$

Writing  $\tanh(u \pm v) = \frac{\sinh(u \pm v)}{\cosh(u \pm v)}$ , expanding and dividing

numerator and denominator by  $\cosh u \cosh v$ , eq. (22) is obtained.

Prob. 16. Given  $\cosh u = 2$ ,  $\cosh v = 3$ , find  $\cosh(u + v)$ .

Prob. 17. Prove the following identities:

1.  $\sinh 2u = 2 \sinh u \cosh u$ .
2.  $\cosh 2u = \cosh^2 u + \sinh^2 u = 1 + 2 \sinh^2 u = 2 \cosh^2 u - 1$ .
3.  $1 + \cosh u = 2 \cosh^2 \frac{1}{2}u$ ,  $\cosh u - 1 = 2 \sinh^2 \frac{1}{2}u$ .
4.  $\tanh \frac{1}{2}u = \frac{\sinh u}{1 + \cosh u} = \frac{\cosh u - 1}{\sinh u} = \frac{(\cosh u - 1)^{\frac{1}{2}}}{(\cosh u + 1)^{\frac{1}{2}}}$ .
5.  $\sinh 2u = \frac{2 \tanh u}{1 - \tanh^2 u}$ ,  $\cosh 2u = \frac{1 + \tanh^2 u}{1 - \tanh^2 u}$ .
6.  $\sinh 3u = 3 \sinh u + 4 \sinh^3 u$ ,  $\cosh 3u = 4 \cosh^3 u - 3 \cosh u$ .
7.  $\cosh u + \sinh u = \frac{1 + \tanh \frac{1}{2}u}{1 - \tanh \frac{1}{2}u}$ .
8.  $(\cosh u + \sinh u)(\cosh v + \sinh v) = \cosh(u + v) + \sinh(u + v)$ .
9. Generalize (8); and show also what it becomes when  $u = v = \dots$ .
10.  $\sinh^2 x \cos^2 y + \cosh^2 x \sin^2 y = \sinh^2 x + \sin^2 y$ .
11.  $\cosh^{-1} m \pm \cosh^{-1} n = \cosh^{-1} [mn \pm \sqrt{(m^2 - 1)(n^2 - 1)}]$ .
12.  $\sinh^{-1} m \pm \sinh^{-1} n = \sinh^{-1} [m \sqrt{1 + n^2} \pm n \sqrt{1 + m^2}]$ .

Prob. 18. What modifications of signs are required in (21), (22), in order to pass to circular functions?

Prob. 19. Modify the identities of Prob. 17 for the same purpose.

## ART. 12. CONVERSION FORMULAS.

To prove that

$$\left. \begin{aligned} \cosh u_1 + \cosh u_2 &= 2 \cosh \frac{1}{2}(u_1 + u_2) \cosh \frac{1}{2}(u_1 - u_2), \\ \cosh u_1 - \cosh u_2 &= 2 \sinh \frac{1}{2}(u_1 + u_2) \sinh \frac{1}{2}(u_1 - u_2), \\ \sinh u_1 + \sinh u_2 &= 2 \sinh \frac{1}{2}(u_1 + u_2) \cosh \frac{1}{2}(u_1 - u_2), \\ \sinh u_1 - \sinh u_2 &= 2 \cosh \frac{1}{2}(u_1 + u_2) \sinh \frac{1}{2}(u_1 - u_2). \end{aligned} \right\} \quad (23)$$

From the addition formulas it follows that

$$\cosh (u + v) + \cosh (u - v) = 2 \cosh u \cosh v,$$

$$\cosh (u + v) - \cosh (u - v) = 2 \sinh u \sinh v,$$

$$\sinh (u + v) + \sinh (u - v) = 2 \sinh u \cosh v,$$

$$\sinh (u + v) - \sinh (u - v) = 2 \cosh u \sinh v,$$

and then by writing  $u + v = u_1$ ,  $u - v = u_2$ ,  $u = \frac{1}{2}(u_1 + u_2)$ ,  $v = \frac{1}{2}(u_1 - u_2)$ , these equations take the form required.

Prob. 20. In passing to circular functions, show that the only modification to be made in the conversion formulas is in the algebraic sign of the right-hand member of the second formula.

Prob. 21. Simplify  $\frac{\cosh 2u + \cosh 4v}{\sinh 2u + \sinh 4v}$ ,  $\frac{\cosh 2u + \cosh 4v}{\cosh 2u - \cosh 4v}$ .

Prob. 22. Prove  $\sinh^2 x - \sinh^2 y = \sinh (x + y) \sinh (x - y)$ .

Prob. 23. Simplify  $\cosh^2 x \cosh^2 y \pm \sinh^2 x \sinh^2 y$ .

Prob. 24. Simplify  $\cosh^2 x \cos^2 y + \sinh^2 x \sin^2 y$ .

### ART. 13. LIMITING RATIOS.

To find the limit, as  $u$  approaches zero, of

$$\frac{\sinh u}{u}, \quad \frac{\tanh u}{u},$$

which are then indeterminate in form.

By eq. (14),  $\sinh u > u > \tanh u$ ; and if  $\sinh u$  and  $\tanh u$  be successively divided by each term of these inequalities, it follows that

$$1 < \frac{\sinh u}{u} < \cosh u,$$

$$\operatorname{sech} u < \frac{\tanh u}{u} < 1.$$

but when  $u \doteq 0$ ,  $\cosh u \doteq 1$ ,  $\operatorname{sech} u = 1$ , hence

$$\lim_{u \doteq 0} \frac{\sinh u}{u} = 1, \quad \lim_{u \doteq 0} \frac{\tanh u}{u} = 1. \quad (24)$$

## ART. 14. DERIVATIVES OF HYPERBOLIC FUNCTIONS.

To prove that

$$\begin{array}{l}
 (a) \quad \frac{d(\sinh u)}{du} = \cosh u, \\
 (b) \quad \frac{d(\cosh u)}{du} = \sinh u, \\
 (c) \quad \frac{d(\tanh u)}{du} = \operatorname{sech}^2 u, \\
 (d) \quad \frac{d(\operatorname{sech} u)}{du} = -\operatorname{sech} u \tanh u, \\
 (e) \quad \frac{d(\operatorname{coth} u)}{du} = -\operatorname{csch}^2 u, \\
 (f) \quad \frac{d(\operatorname{csch} u)}{du} = -\operatorname{csch} u \operatorname{coth} u.
 \end{array} \quad \left. \vphantom{\begin{array}{l} (a) \\ (b) \\ (c) \\ (d) \\ (e) \\ (f) \end{array}} \right\} \quad (25)$$

(a) Let  $y = \sinh u$ ,

$$\begin{aligned}
 \Delta y &= \sinh(u + \Delta u) - \sinh u \\
 &= 2 \cosh \frac{1}{2}(2u + \Delta u) \sinh \frac{1}{2}\Delta u,
 \end{aligned}$$

$$\frac{\Delta y}{\Delta u} = \cosh(u + \frac{1}{2}\Delta u) \frac{\sinh \frac{1}{2}\Delta u}{\frac{1}{2}\Delta u}.$$

Take the limit of both sides, as  $\Delta u \doteq 0$ , and put

$$\lim. \frac{\Delta y}{\Delta u} = \frac{dy}{du} = \frac{d(\sinh u)}{du},$$

$$\lim. \cosh(u + \frac{1}{2}\Delta u) = \cosh u,$$

$$\lim. \frac{\sinh \frac{1}{2}\Delta u}{\frac{1}{2}\Delta u} = 1; \quad (\text{see Art. 13})$$

$$\frac{d(\sinh u)}{du} = \cosh u.$$

(b) Similar to (a).

$$\begin{aligned}
 (c) \quad \frac{d(\tanh u)}{du} &= \frac{d}{du} \cdot \frac{\sinh u}{\cosh u} \\
 &= \frac{\cosh^2 u - \sinh^2 u}{\cosh^2 u} = \frac{1}{\cosh^2 u} = \operatorname{sech}^2 u.
 \end{aligned}$$

(*d*) Similar to (*c*).

$$(e) \quad \frac{d(\operatorname{sech} u)}{du} = \frac{d}{du} \cdot \frac{1}{\cosh u} = -\frac{\sinh u}{\cosh^2 u} = -\operatorname{sech} u \tanh u.$$

(*f*) Similar to (*e*).

It thus appears that the functions  $\sinh u$ ,  $\cosh u$  reproduce themselves in two differentiations; and, similarly, that the circular functions  $\sin u$ ,  $\cos u$  produce their opposites in two differentiations. In this connection it may be noted that the frequent appearance of the hyperbolic (and circular) functions in the solution of physical problems is chiefly due to the fact that they answer the question: What function has its second derivative equal to a positive (or negative) constant multiple of the function itself? (See Probs. 28–30.) An answer such as  $y = \cosh mx$  is not, however, to be understood as asserting that  $mx$  is an actual sectorial measure and  $y$  its characteristic ratio; but only that the relation between the numbers  $mx$  and  $y$  is the same as the known relation between the measure of a hyperbolic sector and its characteristic ratio; and that the numerical value of  $y$  could be found from a table of hyperbolic cosines.

Prob. 25. Show that for circular functions the only modifications required are in the algebraic signs of (*b*), (*d*).

Prob. 26. Show from their derivatives which of the hyperbolic and circular functions diminish as  $u$  increases.

Prob. 27. Find the derivative of  $\tanh u$  independently of the derivatives of  $\sinh u$ ,  $\cosh u$ .

Prob. 28. Eliminate the constants by differentiation from the equation  $y = A \cosh mx + B \sinh mx$ , and prove that  $d^2y/dx^2 = m^2y$ .

Prob. 29. Eliminate the constants from the equation

$$y = A \cos mx + B \sin mx,$$

and prove that  $d^2y/dx^2 = -m^2y$ .

Prob. 30. Write down the most general solutions of the differential equations

$$\frac{d^2y}{dx^2} = m^2y, \quad \frac{d^2y}{dx^2} = -m^2y, \quad \frac{d^4y}{dx^4} = m^4y.$$

## ART. 15. DERIVATIVES OF ANTI-HYPERBOLIC FUNCTIONS.

$$\left. \begin{aligned}
 (a) \quad \frac{d(\sinh^{-1} x)}{dx} &= \frac{1}{\sqrt{x^2 + 1}}, \\
 (b) \quad \frac{d(\cosh^{-1} x)}{dx} &= \frac{1}{\sqrt{x^2 - 1}}, \\
 (c) \quad \frac{d(\tanh^{-1} x)}{dx} &= \frac{1}{1 - x^2} \Big]_{x < 1}, \\
 (d) \quad \frac{d(\coth^{-1} x)}{dx} &= -\frac{1}{x^2 - 1} \Big]_{x > 1}, \\
 (e) \quad \frac{d(\operatorname{sech}^{-1} x)}{dx} &= -\frac{1}{x \sqrt{1 - x^2}}, \\
 (f) \quad \frac{d(\operatorname{csch}^{-1} x)}{dx} &= -\frac{1}{x \sqrt{x^2 + 1}}.
 \end{aligned} \right\} (26)$$

(a) Let  $u = \sinh^{-1} x$ , then  $x = \sinh u$ ,  $dx = \cosh u \, du$   
 $= \sqrt{1 + \sinh^2 u} \, du = \sqrt{1 + x^2} \, du$ ,  $du = dx / \sqrt{1 + x^2}$ .

(b) Similar to (a).

(c) Let  $u = \tanh^{-1} x$ , then  $x = \tanh u$ ,  $dx = \operatorname{sech}^2 u \, du$   
 $= (1 - \tanh^2 u) \, du = (1 - x^2) \, du$ ,  $du = dx / (1 - x^2)$ .

(d) Similar to (c).

(e)  $\frac{d(\operatorname{sech}^{-1} x)}{dx} = \frac{d}{dx} \left( \cosh^{-1} \frac{1}{x} \right) = \frac{-1}{x^2} / \left( \frac{1}{x^2} - 1 \right)^{\frac{1}{2}} = \frac{-1}{x \sqrt{1 - x^2}}$ .

(f) Similar to (e).

Prob. 31. Prove

$$\frac{d(\sin^{-1} x)}{dx} = \frac{1}{\sqrt{1 - x^2}}, \quad \frac{d(\cos^{-1} x)}{dx} = -\frac{1}{\sqrt{1 - x^2}}$$

$$\frac{d(\tan^{-1} x)}{dx} = \frac{1}{1 + x^2}, \quad \frac{d(\cot^{-1} x)}{dx} = -\frac{1}{1 + x^2}.$$



Prob. 32. Prove

$$d \sinh^{-1} \frac{x}{a} = \frac{dx}{\sqrt{x^2 + a^2}}, \quad d \cosh^{-1} \frac{x}{a} = \frac{dx}{\sqrt{x^2 - a^2}},$$

$$d \tanh^{-1} \frac{x}{a} = \frac{adx}{a^2 - x^2} \Big]_{x < a}, \quad d \coth^{-1} \frac{x}{a} = -\frac{adx}{x^2 - a^2} \Big]_{x > a}.$$

Prob. 33. Find  $d(\operatorname{sech}^{-1} x)$  independently of  $\cosh^{-1} x$ .

Prob. 34. When  $\tanh^{-1} x$  is real, prove that  $\coth^{-1} x$  is imaginary, and conversely; except when  $x = 1$ .

Prob. 35. Evaluate  $\frac{\sinh^{-1} x}{\log x}$ ,  $\frac{\cosh^{-1} x}{\log x}$ , when  $x = \infty$ .

## ART. 16. EXPANSION OF HYPERBOLIC FUNCTIONS.

For this purpose take Maclaurin's Theorem,

$$f(u) = f(0) + uf'(0) + \frac{1}{2!} u^2 f''(0) + \frac{1}{3!} u^3 f'''(0) + \dots,$$

and put  $f(u) = \sinh u$ ,  $f'(u) = \cosh u$ ,  $f''(u) = \sinh u$ ,  $\dots$ ,

then  $f(0) = \sinh 0 = 0$ ,  $f'(0) = \cosh 0 = 1$ ,  $\dots$ ;

hence 
$$\sinh u = u + \frac{1}{3!} u^3 + \frac{1}{5!} u^5 + \dots; \quad (27)$$

and similarly, or by differentiation,

$$\cosh u = 1 + \frac{1}{2!} u^2 + \frac{1}{4!} u^4 + \dots \quad (28)$$

By means of these series the numerical values of  $\sinh u$ ,  $\cosh u$ , can be computed and tabulated for successive values of the independent variable  $u$ . They are convergent for all values of  $u$ , because the ratio of the  $n$ th term to the preceding is in the first case  $u^2/(2n-1)(2n-2)$ , and in the second case  $u^2/(2n-2)(2n-3)$ , both of which ratios can be made less than unity by taking  $n$  large enough, no matter what value  $u$  may have.

From these series the following can be obtained by division :

$$\left. \begin{aligned} \tanh u &= u - \frac{1}{3}u^3 + \frac{2}{15}u^5 - \frac{17}{315}u^7 + \dots, \\ \operatorname{sech} u &= 1 - \frac{1}{2}u^2 + \frac{5}{24}u^4 - \frac{61}{720}u^6 + \dots, \\ u \operatorname{coth} u &= 1 + \frac{1}{3}u^2 - \frac{1}{45}u^4 + \frac{2}{945}u^6 - \dots, \\ u \operatorname{csch} u &= 1 - \frac{1}{6}u^2 + \frac{7}{360}u^4 - \frac{31}{15120}u^6 + \dots \end{aligned} \right\} \quad (29)$$

These four developments are seldom used, as there is no observable law in the coefficients, and as the functions  $\tanh u$ ,  $\operatorname{sech} u$ ,  $\operatorname{coth} u$ ,  $\operatorname{csch} u$ , can be found directly from the previously computed values of  $\cosh u$ ,  $\sinh u$ .

Prob. 36. Show that these six developments can be adapted to the circular functions by changing the alternate signs.

#### ART. 17. EXPONENTIAL EXPRESSIONS.

Adding and subtracting (27), (28) give the identities

$$\cosh u + \sinh u = 1 + u + \frac{1}{2!}u^2 + \frac{1}{3!}u^3 + \frac{1}{4!}u^4 + \dots = e^u,$$

$$\cosh u - \sinh u = 1 - u + \frac{1}{2!}u^2 - \frac{1}{3!}u^3 + \frac{1}{4!}u^4 - \dots = e^{-u},$$

$$\left. \begin{aligned} \text{hence } \cosh u &= \frac{1}{2}(e^u + e^{-u}), & \sinh u &= \frac{1}{2}(e^u - e^{-u}), \\ \tanh u &= \frac{e^u - e^{-u}}{e^u + e^{-u}}, & \operatorname{sech} u &= \frac{2}{e^u + e^{-u}}, \text{ etc.} \end{aligned} \right\} \quad (30)$$

The analogous exponential expressions for  $\sin u$ ,  $\cos u$  are

$$\cos u = \frac{1}{2}(e^{ui} + e^{-ui}), \quad \sin u = \frac{1}{2i}(e^{ui} - e^{-ui}), \quad (i = \sqrt{-1})$$

where the symbol  $e^{ui}$  stands for the result of substituting  $ui$  for  $x$  in the exponential development

$$e^x = 1 + x + \frac{1}{2!}x^2 + \frac{1}{3!}x^3 + \dots$$

This will be more fully explained in treating of complex numbers, Arts. 28, 29.

Prob. 37. Show that the properties of the hyperbolic functions could be placed on a purely algebraic basis by starting with equations (30) as their definitions ; for example, verify the identities :

$$\sinh(-u) = -\sinh u, \quad \cosh(-u) = \cosh u,$$

$$\cosh^2 u - \sinh^2 u = 1, \quad \sinh(u+v) = \sinh u \cosh v + \cosh u \sinh v,$$

$$\frac{d^2(\cosh mu)}{du^2} = m^2 \cosh mu, \quad \frac{d^2(\sinh mu)}{du^2} = m^2 \sinh mu.$$

Prob. 38. Prove  $(\cosh u + \sinh u)^n = \cosh nu + \sinh nu$ .

Prob. 39. Assuming from Art. 14 that  $\cosh u$ ,  $\sinh u$  satisfy the differential equation  $d^2y/du^2 = y$ , whose general solution may be written  $y = Ae^u + Be^{-u}$ , where  $A, B$  are arbitrary constants ; show how to determine  $A, B$  in order to derive the expressions for  $\cosh u$ ,  $\sinh u$ , respectively. [Use eq. (15).]

Prob. 40. Show how to construct a table of exponential functions from a table of hyperbolic sines and cosines, and *vice versa*.

Prob. 41. Prove  $u = \log_e (\cosh u + \sinh u)$ .

Prob. 42. Show that the area of any hyperbolic sector is infinite when its terminal line is one of the asymptotes.

Prob. 43. From the relation  $2 \cosh u = e^u + e^{-u}$  prove

$$2^{n-1}(\cosh u)^n = \cosh nu + n \cosh (n-2)u + \frac{1}{2}n(n-1) \cosh (n-4)u + \dots,$$

and examine the last term when  $n$  is odd or even.

Find also the corresponding expression for  $2^{n-1} (\sinh u)^n$ .

## ART. 18. EXPANSION OF ANTI-FUNCTIONS.

$$\begin{aligned} \text{Since } \frac{d(\sinh^{-1} x)}{dx} &= \frac{1}{\sqrt{1+x^2}} = (1+x^2)^{-\frac{1}{2}} \\ &= 1 - \frac{1}{2}x^2 + \frac{1}{2} \frac{3}{4}x^4 - \frac{1}{2} \frac{3}{4} \frac{5}{6}x^6 + \dots, \end{aligned}$$

hence, by integration,

$$\sinh^{-1} x = x - \frac{1}{2} \frac{x^3}{3} + \frac{1}{2} \frac{3}{4} \frac{x^5}{5} - \frac{1}{2} \frac{3}{4} \frac{5}{6} \frac{x^7}{7} + \dots, \quad (31)$$

the integration-constant being zero, since  $\sinh^{-1} x$  vanishes with  $x$ . This series is convergent, and can be used in compu-

tation, only when  $x < 1$ . Another series, convergent when  $x > 1$ , is obtained by writing the above derivative in the form

$$\begin{aligned} \frac{d(\sinh^{-1} x)}{dx} &= (x^2 + 1)^{-\frac{1}{2}} = \frac{1}{x} \left( 1 + \frac{1}{x^2} \right)^{-\frac{1}{2}} \\ &= \frac{1}{x} \left[ 1 - \frac{1}{2} \frac{1}{x^2} + \frac{1}{2} \frac{3}{4} \frac{1}{x^4} - \frac{1}{2} \frac{3}{4} \frac{5}{6} \frac{1}{x^6} + \dots \right], \end{aligned}$$

$$\therefore \sinh^{-1} x = C + \log x + \frac{1}{2} \frac{1}{2x^2} - \frac{1}{2} \frac{3}{4} \frac{1}{4x^4} + \frac{1}{2} \frac{3}{4} \frac{5}{6} \frac{1}{6x^6} - \dots, \quad (32)$$

where  $C$  is the integration-constant, which will be shown in Art. 19 to be equal to  $\log_e 2$ .

A development of similar form is obtained for  $\cosh^{-1} x$ ; for

$$\begin{aligned} \frac{d(\cosh^{-1} x)}{dx} &= (x^2 - 1)^{-\frac{1}{2}} = \frac{1}{x} \left( 1 - \frac{1}{x^2} \right)^{-\frac{1}{2}} \\ &= \frac{1}{x} \left[ 1 + \frac{1}{2} \frac{1}{x^2} + \frac{1}{2} \frac{3}{4} \frac{1}{x^4} + \frac{1}{2} \frac{3}{4} \frac{5}{6} \frac{1}{x^6} + \dots \right], \end{aligned}$$

hence

$$\cosh^{-1} x = C + \log x - \frac{1}{2} \frac{1}{2x^2} - \frac{1}{2} \frac{3}{4} \frac{1}{4x^4} - \frac{1}{2} \frac{3}{4} \frac{5}{6} \frac{1}{6x^6} - \dots, \quad (33)$$

in which  $C$  is again equal to  $\log_e 2$  [Art. 19, Prob. 46]. In order that the function  $\cosh^{-1} x$  may be real,  $x$  must not be less than unity; but when  $x$  exceeds unity, this series is convergent, hence it is always available for computation.

$$\text{Again, } \frac{d(\tanh^{-1} x)}{dx} = \frac{1}{1 - x^2} = 1 + x^2 + x^4 + x^6 + \dots,$$

$$\text{and hence } \tanh^{-1} x = x + \frac{1}{3} x^3 + \frac{1}{5} x^5 + \frac{1}{7} x^7 + \dots, \quad (34)$$

From (32), (33), (34) are derived:

$$\begin{aligned} \operatorname{sech}^{-1} x &= \cosh^{-1} \frac{1}{x} \\ &= C - \log x - \frac{x^2}{2 \cdot 2} - \frac{1 \cdot 3 \cdot x^4}{2 \cdot 4 \cdot 4} - \frac{1 \cdot 3 \cdot 5 \cdot x^6}{2 \cdot 4 \cdot 6 \cdot 6} - \dots; \quad (35) \end{aligned}$$

$$\begin{aligned} \operatorname{csch}^{-1} x &= \sinh^{-1} \frac{1}{x} = \frac{1}{x} - \frac{1}{2} \frac{1}{3x^3} + \frac{1}{2} \cdot \frac{3}{4} \frac{1}{5x^5} - \frac{1}{2} \frac{3}{4} \frac{5}{6} \frac{1}{7x^7} + \dots, \\ &= C - \log x + \frac{x^2}{2 \cdot 2} - \frac{1 \cdot 3 \cdot x^4}{2 \cdot 4 \cdot 4} + \frac{1 \cdot 3 \cdot 5 \cdot x^6}{2 \cdot 4 \cdot 6 \cdot 6} - \dots; \quad (36) \end{aligned}$$

$$\operatorname{coth}^{-1} x = \tanh^{-1} \frac{1}{x} = \frac{1}{x} + \frac{1}{3x^3} + \frac{1}{5x^5} + \frac{1}{7x^7} + \dots \quad (37)$$

Prob. 44. Show that the series for  $\tanh^{-1} x$ ,  $\operatorname{coth}^{-1} x$ ,  $\operatorname{sech}^{-1} x$ , are always available for computation.

Prob. 45. Show that one or other of the two developments of the inverse hyperbolic cosecant is available.

### ART. 19. LOGARITHMIC EXPRESSION OF ANTI-FUNCTIONS.

Let  $x = \cosh u$ , then  $\sqrt{x^2 - 1} = \sinh u$ ;  
 therefore  $x + \sqrt{x^2 - 1} = \cosh u + \sinh u = e^u$ ,  
 and  $u = \cosh^{-1} x = \log(x + \sqrt{x^2 - 1})$ . (38)

Similarly,  $\sinh^{-1} x = \log(x + \sqrt{x^2 + 1})$ . (39)

Also  $\operatorname{sech}^{-1} x = \cosh^{-1} \frac{1}{x} = \log \frac{1 + \sqrt{1 - x^2}}{x}$ , (40)

$$\operatorname{csch}^{-1} x = \sinh^{-1} \frac{1}{x} = \log \frac{1 + \sqrt{1 + x^2}}{x}. \quad (41)$$

Again, let  $x = \tanh u = \frac{e^u - e^{-u}}{e^u + e^{-u}}$ ,

therefore  $\frac{1+x}{1-x} = \frac{e^u}{e^{-u}} = e^{2u}$ ,  
 $2u = \log \frac{1+x}{1-x}$ ,  $\tanh^{-1} x = \frac{1}{2} \log \frac{1+x}{1-x}$ ; (42)

and  $\operatorname{coth}^{-1} x = \tanh^{-1} \frac{1}{x} = \frac{1}{2} \log \frac{x+1}{x-1}$ . (43)

Prob. 46. Show from (39), (40), that, when  $x \doteq \infty$ ,

$$\sinh^{-1} x - \log x \doteq \log 2, \quad \cosh^{-1} x - \log x \doteq \log 2,$$

and hence show that the integration-constants in (32), (33) are each equal to  $\log 2$ .

Prob. 47. Derive from (42) the series for  $\tanh^{-1}x$  given in (34).

Prob. 48. Prove the identities:

$$\log x = 2 \tanh^{-1} \frac{x-1}{x+1} = \tanh^{-1} \frac{x^2-1}{x^2+1} = \sinh^{-1} \frac{1}{2}(x-x^{-1}) = \cosh^{-1} \frac{1}{2}(x+x^{-1});$$

$$\log \sec x = 2 \tanh^{-1} \tan^2 \frac{1}{2}x; \quad \log \csc x = 2 \tanh^{-1} \tan^2(\frac{1}{4}\pi + \frac{1}{2}x);$$

$$\log \tan x = -\tanh^{-1} \cos 2x = -\sinh^{-1} \cot 2x = \cosh^{-1} \csc 2x.$$

#### ART. 20. THE GUDERMANIAN FUNCTION.

The correspondence of sectors of the same species was discussed in Arts. 1-4. It is now convenient to treat of the correspondence that may exist between sectors of different species.

Two points  $P_1, P_2$ , on any hyperbola and ellipse, are said to correspond with reference to two pairs of conjugates  $O_1A_1, O_1B_1$ , and  $O_2A_2, O_2B_2$ , respectively, when

$$x_1/a_1 = a_2/x_2, \quad (44)$$

and when  $y_1, y_2$  have the same sign. The sectors  $A_1O_1P_1, A_2O_2P_2$  are then also said to correspond. Thus corresponding sectors of central conics of different species are of the same sign and have their primary characteristic ratios reciprocal. Hence there is a fixed functional relation between their respective measures. The elliptic sectorial measure is called the gudermanian of the corresponding hyperbolic sectorial measure, and the latter the anti-gudermanian of the former. This relation is expressed by

$$S_2/K_2 = \text{gd } S_1/K_1$$

$$\text{or } v = \text{gd } u, \quad \text{and } u = \text{gd}^{-1}v. \quad (45)$$

#### ART. 21. CIRCULAR FUNCTIONS OF GUDERMANIAN.

The six hyperbolic functions of  $u$  are expressible in terms of the six circular functions of its gudermanian; for since

$$\frac{x_1}{a_1} = \cosh u, \quad \frac{x_2}{a_2} = \cos v, \quad (\text{see Arts. 6, 7})$$

in which  $u, v$  are the measures of corresponding hyperbolic and elliptic sectors,

hence

$$\left. \begin{aligned} \cosh u &= \sec v, & [\text{eq. (44)}] \\ \sinh u &= \sqrt{\sec^2 v - 1} = \tan v, \\ \tanh u &= \tan v / \sec v = \sin v, \\ \coth u &= \csc v, \\ \operatorname{sech} u &= \cos v, \\ \operatorname{csch} u &= \cot v. \end{aligned} \right\} \quad (46)$$

The gudermanian is sometimes useful in computation ; for instance, if  $\sinh u$  be given,  $v$  can be found from a table of natural tangents, and the other circular functions of  $v$  will give the remaining hyperbolic functions of  $u$ . Other uses of this function are given in Arts. 22-26, 32-36.

Prob. 49. Prove that  $\operatorname{gd} u = \sec^{-1}(\cosh u) = \tan^{-1}(\sinh u)$   
 $= \cos^{-1}(\operatorname{sech} u) = \sin^{-1}(\tanh u),$

Prob. 50. Prove  $\operatorname{gd}^{-1} v = \cosh^{-1}(\sec v) = \sinh^{-1}(\tan v)$   
 $= \operatorname{sech}^{-1}(\cos v) = \tanh^{-1}(\sin v).$

Prob. 51. Prove  $\operatorname{gd} 0 = 0, \operatorname{gd} \infty = \frac{1}{2}\pi, \operatorname{gd}(-\infty) = -\frac{1}{2}\pi,$   
 $\operatorname{gd}^{-1} 0 = 0, \operatorname{gd}^{-1}(\frac{1}{2}\pi) = \infty, \operatorname{gd}^{-1}(-\frac{1}{2}\pi) = -\infty.$

Prob 52. Show that  $\operatorname{gd} u$  and  $\operatorname{gd}^{-1} v$  are odd functions of  $u, v$ .

Prob. 53. From the first identity in 4, Prob. 19, derive the relation  $\tanh \frac{1}{2}u = \tan \frac{1}{2}v$ .

Prob. 54. Prove

$$\tanh^{-1}(\tan u) = \frac{1}{2} \operatorname{gd} 2u, \text{ and } \tan^{-1}(\tanh x) = \frac{1}{2} \operatorname{gd}^{-1} 2x.$$

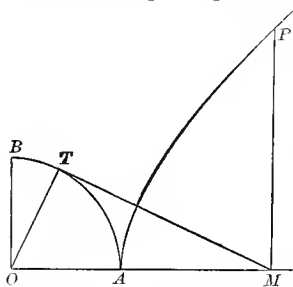
### ART. 22. GUDERMANIAN ANGLE

If a circle be used instead of the ellipse of Art. 20, the gudermanian of the hyperbolic sectorial measure will be equal to the radian measure of the angle of the corresponding circular sector (see eq. (6), and Art. 2, Prob. 2). This angle will be called the gudermanian angle ; but the gudermanian function  $v$ , as above defined, is merely a number, or ratio ; and this number is equal to the radian measure of the gudermanian angle  $\theta$ , which is itself usually tabulated in degree measure ; thus

$$\theta = 180^\circ v / \pi. \quad . . . . . (47)$$

Prob. 55. Show that the gudermanian angle of  $u$  may be constructed as follows:

Take the principal radius  $OA$  of an equilateral hyperbola, as the initial line, and  $OP$  as the terminal line, of the sector whose measure is  $u$ ; from  $M$ , the foot of the ordinate of  $P$ , draw  $MT$  tangent to the circle whose diameter is the transverse axis; then  $AOT$  is the angle required.\*



Prob. 56. Show that the angle  $\theta$  never exceeds  $90^\circ$ .

Prob. 57. The bisector of angle  $AOT$  bisects the sector  $AOP$  (see Prob. 13, Art. 9, and Prob. 53, Art. 21), and the line  $AP$ . (See Prob. 1, Art. 3.)

Prob. 58. This bisector is parallel to  $TP$ , and the points  $T, P$  are in line with the point diametrically opposite to  $A$ .

Prob. 59. The tangent at  $P$  passes through the foot of the ordinate of  $T$ , and intersects  $TM$  on the tangent at  $A$ .

Prob. 60. The angle  $APM$  is half the gudermanian angle.

#### ART. 23. DERIVATIVES OF GUDERMANIAN AND INVERSE.

Let  $v = \text{gd } u, \quad u = \text{gd}^{-1} v,$

then  $\sec v = \cosh u,$

$$\sec v \tan v dv = \sinh u du,$$

$$\sec v dv = du,$$

therefore  $d(\text{gd}^{-1} v) = \sec v dv. \quad (48)$

Again,  $dv = \cos v du = \text{sech } u du,$

therefore  $d(\text{gd } u) = \text{sech } u du. \quad (49)$

Prob. 61. Differentiate:

$$\begin{aligned} y = \sinh u - \text{gd } u, & \quad y = \sin v + \text{gd}^{-1} v, \\ y = \tanh u \text{ sech } u + \text{gd } u, & \quad y = \tan v \sec v + \text{gd}^{-1} v. \end{aligned}$$

\* This angle was called by Gudermann the longitude of  $u$ , and denoted by  $lu$ . His inverse symbol was  $\mathfrak{L}$ ; thus  $u = \mathfrak{L}(lu)$ . (Crelle's Journal, vol. 6, 1830.) Lambert, who introduced the angle  $\theta$ , named it the transcendent angle. (Hist. de l'acad. roy. de Berlin, 1761.) Hoüel (Nouvelles Annales, vol. 3, 1864) called it the hyperbolic amplitude of  $u$ , and wrote it  $\text{amh } u$ , in analogy with the amplitude of an elliptic function, as shown in Prob. 62. Cayley (Elliptic Functions, 1876) made the usage uniform by attaching to the angle the name of the mathematician who had used it extensively in tabulation and in the theory of elliptic functions of modulus unity.



Prob. 62. Writing the "elliptic integral of the first kind" in the form

$$u = \int_a^\phi \frac{d\phi}{\sqrt{1 - \kappa^2 \sin^2 \phi}},$$

$\kappa$  being called the modulus, and  $\phi$  the amplitude; that is,

$$\phi = \text{am } u, \pmod{\kappa},$$

show that, in the special case when  $\kappa = 1$ ,

$$u = \text{gd}^{-1} \phi, \quad \text{am } u = \text{gd } u, \quad \sin \text{am } u = \tanh u,$$

$$\cos \text{am } u = \text{sech } u, \quad \tan \text{am } u = \sinh u;$$

and that thus the elliptic functions  $\sin \text{am } u$ , etc., degenerate into the hyperbolic functions, when the modulus is unity.\*

#### ART. 24. SERIES FOR GUDERMANIAN AND ITS INVERSE.

Substitute for  $\text{sech } u$ ,  $\sec v$  in (49), (48) their expansions, Art. 16, and integrate, then

$$\text{gd } u = u - \frac{1}{6}u^3 + \frac{1}{24}u^5 - \frac{6}{8040}u^7 + \dots \quad (50)$$

$$\text{gd}^{-1}v = v + \frac{1}{8}v^3 + \frac{1}{24}v^5 + \frac{6}{8040}v^7 + \dots \quad (51)$$

No constants of integration appear, since  $\text{gd } u$  vanishes with  $u$ , and  $\text{gd}^{-1}v$  with  $v$ . These series are seldom used in computation, as  $\text{gd } u$  is best found and tabulated by means of tables of natural tangents and hyperbolic sines, from the equation

$$\text{gd } u = \tan^{-1}(\sinh u),$$

and a table of the direct function can be used to furnish the numerical values of the inverse function; or the latter can be obtained from the equation,

$$\text{gd}^{-1}v = \sinh^{-1}(\tan v) = \cosh^{-1}(\sec v).$$

To obtain a logarithmic expression for  $\text{gd}^{-1}v$ , let

$$\text{gd}^{-1}v = u, \quad v = \text{gd } u,$$

\* The relation  $\text{gd } u = \text{am } u, \pmod{1}$ , led Hoüel to name the function  $\text{gd } u$ , the hyperbolic amplitude of  $u$ , and to write it  $\text{amh } u$  (see note, Art. 22). In this connection Cayley expressed the functions  $\tanh u$ ,  $\text{sech } u$ ,  $\sinh u$  in the form  $\sin \text{gd } u$ ,  $\cos \text{gd } u$ ,  $\tan \text{gd } u$ , and wrote them  $\text{sg } u$ ,  $\text{cg } u$ ,  $\text{tg } u$ , to correspond with the abbreviations  $\text{sn } u$ ,  $\text{cn } u$ ,  $\text{dn } u$  for  $\sin \text{am } u$ ,  $\cos \text{am } u$ ,  $\tan \text{am } u$ . Thus  $\tanh u = \text{sg } u = \text{sn } u, \pmod{1}$ ; etc.

It is well to note that neither the elliptic nor the hyperbolic functions received their names on account of the relation existing between them in a special case. (See foot-note, p. 107.)

therefore  $\sec v = \cosh u$ ,  $\tan v = \sinh u$ ,

$$\sec v + \tan v = \cosh u + \sinh u = e^u,$$

$$e^u = \frac{1 + \sin v}{\cos v} = \frac{1 - \cos(\frac{1}{2}\pi + v)}{\sin(\frac{1}{2}\pi + v)} = \tan(\frac{1}{4}\pi + \frac{1}{2}v),$$

$$u = \text{gd}^{-1}v = \log_e \tan(\frac{1}{4}\pi + \frac{1}{2}v). \quad (52)$$

Prob. 63. Evaluate  $\left. \frac{\text{gd } u - u}{u^3} \right]_{u=0}$ ,  $\left. \frac{\text{gd}^{-1}v - v}{v^3} \right]_{v=0}$ .

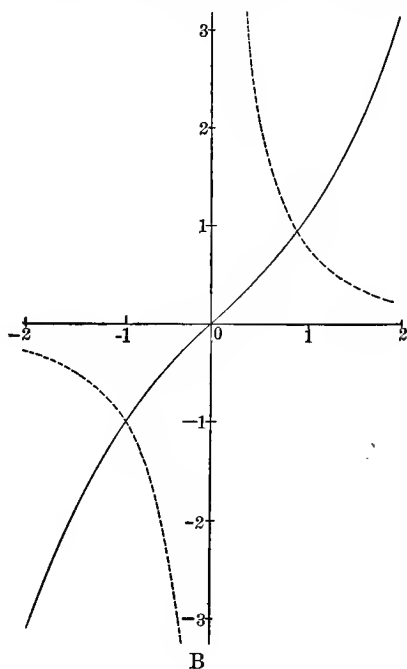
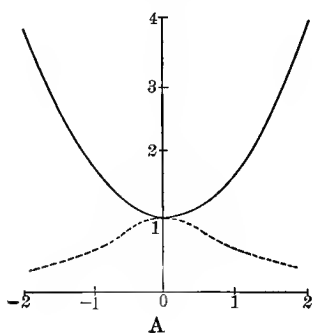
Prob. 64. Prove that  $\text{gd } u - \sin u$  is an infinitesimal of the fifth order, when  $u = 0$ .

Prob. 65. Prove the relations

$$\frac{1}{4}\pi + \frac{1}{2}v = \tan^{-1}e^u, \quad \frac{1}{4}\pi - \frac{1}{2}v = \tan^{-1}e^{-u}.$$

### ART. 25. GRAPHS OF HYPERBOLIC FUNCTIONS.

Drawing two rectangular axes, and laying down a series of points whose abscissas represent, on any convenient scale, successive values of the sectorial measure, and whose ordinates represent, preferably on the same scale, the corresponding values of the function to be plotted, the locus traced out by this series of points will be a graphical representation of the variation of the function as the sectorial meas-



ure varies. The equations of the curves in the ordinary cartesian notation are :

Fig.	Full Lines.	Dotted Lines.
A	$y = \cosh x,$	$y = \operatorname{sech} x;$
B	$y = \sinh x,$	$y = \operatorname{csch} x;$
C	$y = \tanh x,$	$y = \operatorname{coth} x;$
D	$y = \operatorname{gd} x.$	

Here  $x$  is written for the sectorial measure  $u$ , and  $y$  for the numerical value of  $\cosh u$ , etc. It is thus to be noted that the variables  $x, y$  are numbers, or ratios, and that the equation  $y = \cosh x$  merely expresses that the relation between the numbers  $x$  and  $y$  is taken to be the same as the relation between a sectorial measure and its characteristic ratio. The numerical values of  $\cosh u, \sinh u, \tanh u$  are given in the tables at the end of this chapter for values of  $u$  between 0 and 4. For greater values they may be computed from the developments of Art. 16.

The curves exhibit graphically the relations :

$$\operatorname{sech} u = \frac{1}{\cosh u}, \quad \operatorname{csch} u = \frac{1}{\sinh u}, \quad \operatorname{coth} u = \frac{1}{\tanh u};$$

$$\cosh u < 1, \quad \operatorname{sech} u > 1, \quad \tanh u > 1, \quad \operatorname{gd} u < \frac{1}{2}\pi, \text{ etc.};$$

$$\sinh(-u) = -\sinh u, \quad \cosh(-u) = \cosh u,$$

$$\tanh(-u) = -\tanh u, \quad \operatorname{gd}(-u) = -\operatorname{gd} u, \text{ etc.};$$

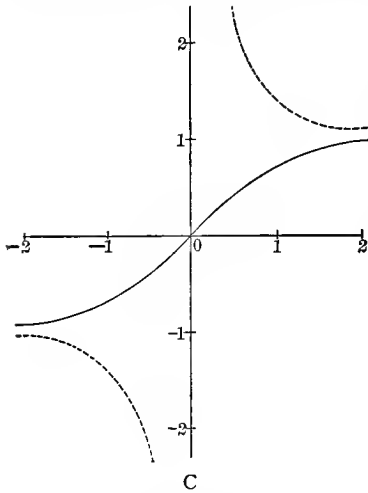
$$\cosh 0 = 1, \quad \sinh 0 = 0, \quad \tanh 0 = 0, \quad \operatorname{csch}(0) = \infty, \text{ etc.};$$

$$\cosh(\pm \infty) = \infty, \quad \sinh(\pm \infty) = \pm \infty, \quad \tanh(\pm \infty) = \pm 1, \text{ etc.}$$

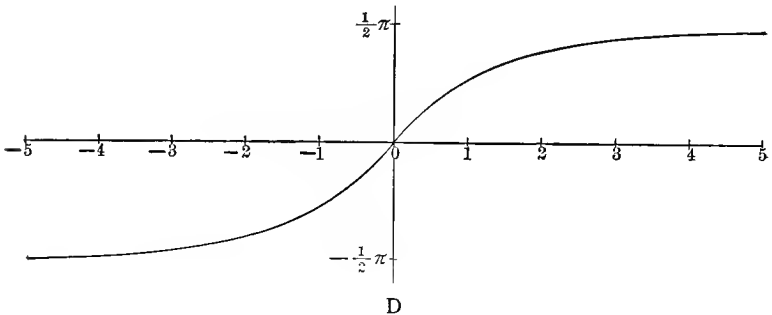
The slope of the curve  $y = \sinh x$  is given by the equation  $dy/dx = \cosh x$ , showing that it is always positive, and that the curve becomes more nearly vertical as  $x$  becomes infinite. Its direction of curvature is obtained from  $d^2y/dx^2 = \sinh x$ , proving that the curve is concave downward when  $x$  is negative, and upward when  $x$  is positive. The point of inflexion is at the origin, and the inflexional tangent bisects the angle between the axes.

The direction of curvature of the locus  $y = \operatorname{sech} x$  is given by  $d^2y/dx^2 = \operatorname{sech} x(2 \tanh^2 x - 1)$ , and thus the curve is concave downwards or upwards

according as  $2 \tanh^2 x - 1$  is negative or positive. The inflexions occur at the points  $x = \pm \tanh^{-1}.707, = \pm .881$ ,  $y = .707$ ; and the slopes of the inflexional tangents are  $\pm 1/2$ .



that  $x$  is so small as .1. The curves  $y = \operatorname{csch} x, y = \sinh x$  cross at the points  $x = \pm .881, y = \pm 1$ .



Prob. 66. Find the direction of curvature, the inflexional tangent, and the asymptotes of the curves  $y = \operatorname{gd} x, y = \tanh x$ .

Prob. 67. Show that there is no inflexion-point on the curves  $y = \operatorname{cosh} x, y = \operatorname{coth} x$ .

Prob. 68. Show that any line  $y = mx + n$  meets the curve  $y = \tanh x$  in either three real points or one. Hence prove that the equation  $\tanh x = mx + n$  has either three real roots or one. From the figure give an approximate solution of the equation  $\tanh x = x - 1$ .

Prob. 69. Solve the equations:  $\cosh x = x + 2$ ;  $\sinh x = \frac{3}{2}x$ ;  $\operatorname{gd} x = x - \frac{1}{2}\pi$ .

Prob. 70. Show which of the graphs represent even functions, and which of them represent odd ones.

### ART. 26. ELEMENTARY INTEGRALS.

The following useful indefinite integrals follow from Arts. 14, 15, 23:

Hyperbolic.

Circular.

$$1. \int \sinh u \, du = \cosh u, \quad \int \sin u \, du = -\cos u,$$

$$2. \int \cosh u \, du = \sinh u, \quad \int \cos u \, du = \sin u,$$

$$3. \int \tanh u \, du = \log \cosh u, \quad \int \tan u \, du = -\log \cos u,$$

$$4. \int \coth u \, du = \log \sinh u, \quad \int \cot u \, du = \log \sin u,$$

$$5. \int \operatorname{csch} u \, du = \log \tanh \frac{u}{2}, \quad \int \operatorname{csc} u \, du = \log \tan \frac{u}{2},$$

$$= -\sinh^{-1}(\operatorname{csch} u), \quad = -\cosh^{-1}(\operatorname{csc} u),$$

$$6. \int \operatorname{sech} u \, du = \operatorname{gd} u, \quad \int \sec u \, du = \operatorname{gd}^{-1} u,$$

$$7. \int \frac{dx}{\sqrt{x^2 + a^2}} = \sinh^{-1} \frac{x}{a},^* \quad \int \frac{dx}{\sqrt{a^2 - x^2}} = \sin^{-1} \frac{x}{a},$$

$$8. \int \frac{dx}{\sqrt{x^2 - a^2}} = \cosh^{-1} \frac{x}{a}, \quad \int \frac{-dx}{\sqrt{a^2 - x^2}} = \cos^{-1} \frac{x}{a},$$

$$9. \int \frac{dx}{a^2 - x^2} \Big]_{x < a} = \frac{1}{a} \tanh^{-1} \frac{x}{a}, \quad \int \frac{dx}{a^2 + x^2} = \frac{1}{a} \tan^{-1} \frac{x}{a},$$

\* Forms 7-12 are preferable to the respective logarithmic expressions (Art. 19), on account of the close analogy with the circular forms, and also because they involve functions that are directly tabulated. This advantage appears more clearly in 13-20.

$$10. \int \frac{-dx}{x^2 - a^2} \Big]_{x>a} = \frac{1}{a} \coth^{-1} \frac{x}{a}, \int \frac{-dx}{a^2 + x^2} = \frac{1}{a} \cot^{-1} \frac{x}{a},$$

$$11. \int \frac{-dx}{x \sqrt{a^2 + x^2}} = \frac{1}{a} \operatorname{sech}^{-1} \frac{x}{a}, \int \frac{dx}{x \sqrt{x^2 - a^2}} = \frac{1}{a} \sec^{-1} \frac{x}{a},$$

$$12. \int \frac{-dx}{x \sqrt{a^2 + x^2}} = \frac{1}{a} \operatorname{csch}^{-1} \frac{x}{a}, \int \frac{-dx}{x \sqrt{x^2 - a^2}} = \frac{1}{a} \csc^{-1} \frac{x}{a}.$$

From these fundamental integrals the following may be derived:

$$13. \int \frac{dx}{\sqrt{ax^2 + 2bx + c}} = \frac{1}{\sqrt{a}} \sinh^{-1} \frac{ax + b}{\sqrt{ac - b^2}}, \quad a \text{ positive, } ac > b^2;$$

$$= \frac{1}{\sqrt{a}} \cosh^{-1} \frac{ax + b}{\sqrt{b^2 - ac}}, \quad a \text{ positive, } ac < b^2;$$

$$= \frac{1}{\sqrt{-a}} \cos^{-1} \frac{ax + b}{\sqrt{b^2 - ac}}, \quad a \text{ negative.}$$

$$14. \int \frac{dx}{ax^2 + 2bx + c} = \frac{1}{\sqrt{ac - b^2}} \tan^{-1} \frac{ax + b}{\sqrt{ac - b^2}}, \quad ac > b^2;$$

$$= \frac{-1}{\sqrt{b^2 - ac}} \tanh^{-1} \frac{ax + b}{\sqrt{b^2 - ac}}, \quad ac < b^2, \quad ax + b < \sqrt{b^2 - ac};$$

$$= \frac{-1}{\sqrt{b^2 - ac}} \coth^{-1} \frac{ax + b}{\sqrt{b^2 - ac}}, \quad ac < b^2, \quad ax + b > \sqrt{b^2 - ac};$$

$$\text{Thus, } \int_4^5 \frac{dx}{x^2 - 4x + 3} = -\coth^{-1}(x-2) \Big]_4^5 = \coth^{-1} 2 - \coth^{-1} 3$$

$$= \tanh^{-1}(.5) - \tanh^{-1}(.3333) = .5494 - .3466 = .2028.*$$

$$\int_2^{2.5} \frac{dx}{x^2 - 4x + 3} = -\tanh^{-1}(x-2) \Big]_2^{2.5} = \tanh^{-1} 0 - \tanh^{-1}(.5)$$

$$= -.5494.$$

(By interpreting these two integrals as areas, show graphically that the first is positive, and the second negative.)

$$15. \int \frac{dx}{(a-x)\sqrt{x-b}} = \frac{2}{\sqrt{a-b}} \tanh^{-1} \sqrt{\frac{x-b}{a-b}},$$

\* For  $\tanh^{-1}(.5)$  interpolate between  $\tanh^{-1}(.54) = .4930$ ,  $\tanh^{-1}(.56) = .5080$  (see tables, pp. 162, 163); and similarly for  $\tanh^{-1}(.3333)$ .

or  $\frac{-2}{\sqrt{b-a}} \tan^{-1} \sqrt{\frac{x-b}{b-a}}$ , or  $\frac{2}{\sqrt{a-b}} \coth^{-1} \sqrt{\frac{x-b}{a-b}}$ ;  
 the real form to be taken. (Put  $x - b = z^2$ , and apply 9, 10.)

$$16. \int \frac{dx}{(a-x)\sqrt{b-x}} = \frac{2}{\sqrt{b-a}} \tanh^{-1} \sqrt{\frac{b-x}{b-a}};$$

$$\text{or } \frac{2}{\sqrt{b-a}} \coth^{-1} \sqrt{\frac{b-x}{b-a}}; \text{ or } \frac{-2}{\sqrt{a-b}} \tan^{-1} \sqrt{\frac{b-x}{a-b}};$$

the real form to be taken.

$$17. \int (x^2 - a^2)^{\frac{1}{2}} dx = \frac{1}{2} x(x^2 - a^2)^{\frac{1}{2}} - \frac{1}{2} a^2 \cosh^{-1} \frac{x}{a}.$$

By means of a reduction-formula this integral is easily made to depend on 8. It may also be obtained by transforming the expression into hyperbolic functions by the assumption  $x = a \cosh u$ , when the integral takes the form

$$a^2 \int \sinh^2 u du = \frac{a^2}{2} \int (\cosh 2u - 1) du = \frac{1}{4} a^2 (\sinh 2u - 2u)$$

$$= \frac{1}{2} a^2 (\sinh u \cosh u - u),$$

which gives 17 on replacing  $a \cosh u$  by  $x$ , and  $a \sinh u$  by  $(x^2 - a^2)^{\frac{1}{2}}$ . The geometrical interpretation of the result is evident, as it expresses that the area of a rectangular-hyperbolic segment  $AMP$  is the difference between a triangle  $OMP$  and a sector  $OAP$ .

$$18. \int (a^2 - x^2)^{\frac{1}{2}} dx = \frac{1}{2} x(a^2 - x^2)^{\frac{1}{2}} + \frac{1}{2} a^2 \sin^{-1} \frac{x}{a}.$$

$$19. \int (x^2 + a^2)^{\frac{1}{2}} dx = \frac{1}{2} x(x^2 + a^2)^{\frac{1}{2}} + \frac{1}{2} a^2 \sinh^{-1} \frac{x}{a}.$$

$$20. \int \sec^3 \phi d\phi = \int (1 + \tan^2 \phi)^{\frac{1}{2}} d \tan \phi$$

$$= \frac{1}{2} \tan \phi (1 + \tan^2 \phi)^{\frac{1}{2}} + \frac{1}{2} \sinh^{-1} (\tan \phi)$$

$$= \frac{1}{2} \sec \phi \tan \phi + \frac{1}{2} \operatorname{gd}^{-1} \phi.$$

$$21. \int \operatorname{sech}^3 u du = \frac{1}{2} \operatorname{sech} u \tanh u + \frac{1}{2} \operatorname{gd} u.$$

Prob. 71. What is the geometrical interpretation of 18, 19?

Prob. 72. Show that  $\int (ax^2 + 2bx + c)^{\frac{1}{2}} dx$  reduces to 17, 18, 19,

respectively: when  $a$  is positive, with  $ac < b^2$ ; when  $a$  is negative; and when  $a$  is positive, with  $ac > b^2$ .

Prob. 73. Prove  $\int \sinh u \tanh u \, du = \sinh u - \operatorname{gd} u$ ,

$$\int \cosh u \coth u \, du = \cosh u + \log \tanh \frac{u}{2}.$$

Prob. 74. Integrate

$$(x^2 + 2x + 5)^{-\frac{1}{2}} dx, \quad (x^2 + 2x + 5)^{-1} dx, \quad (x^2 + 2x + 5)^{\frac{1}{2}} dx.$$

Prob. 75. In the parabola  $y^2 = 4px$ , if  $s$  be the length of arc measured from the vertex, and  $\phi$  the angle which the tangent line makes with the vertical tangent, prove that the intrinsic equation of the curve is  $ds/d\phi = 2p \sec^3 \phi$ ,  $s = \frac{1}{2} \sec \phi \tan \phi + \frac{1}{2} \operatorname{gd}^{-1} \phi$ .

Prob. 76. The polar equation of a parabola being  $r = a \sec^2 \frac{1}{2} \theta$ , referred to its focus as pole, express  $s$  in terms of  $\theta$ .

Prob. 77. Find the intrinsic equation of the curve  $y/a = \cosh x/a$ , and of the curve  $y/a = \log \sec x/a$ .

Prob. 78. Investigate a formula of reduction for  $\int \cosh^n x \, dx$ ; also integrate by parts  $\cosh^{-1} x \, dx$ ,  $\tanh^{-1} x \, dx$ ,  $(\sinh^{-1} x)^2 dx$ ; and show that the ordinary methods of reduction for  $\int \cos^m x \sin^n x \, dx$  can be applied to  $\int \cosh^m x \sinh^n x \, dx$ .

## ART. 27. FUNCTIONS OF COMPLEX NUMBERS.

As vector quantities are of frequent occurrence in Mathematical Physics; and as the numerical measure of a vector in terms of a standard vector is a complex number of the form  $x + iy$ , in which  $x, y$  are real, and  $i$  stands for  $\sqrt{-1}$ ; it becomes necessary in treating of any class of functional operations to consider the meaning of these operations when performed on such generalized numbers.\* The geometrical definitions of  $\cosh u$ ,  $\sinh u$ , given in Art. 7, being then no longer applicable, it is necessary to assign to each of the symbols

\* The use of vectors in electrical theory is shown in Bedell and Crehore's *Alternating Currents*, Chaps. XIV-XX (first published in 1892). The advantage of introducing the complex measures of such vectors into the differential equations is shown by Steinmetz, *Proc. Elec. Congress*, 1893; while the additional convenience of expressing the solution in hyperbolic functions of these complex numbers is exemplified by Kennelly, *Proc. American Institute Electrical Engineers*, April 1895. (See below, Art. 37.)



$\cosh(x + iy)$ ,  $\sinh(x + iy)$ , a suitable algebraic meaning, which should be consistent with the known algebraic values of  $\cosh x$ ,  $\sinh x$ , and include these values as a particular case when  $y = 0$ . The meanings assigned should also, if possible, be such as to permit the addition-formulas of Art. 11 to be made general, with all the consequences that flow from them.

Such definitions are furnished by the algebraic developments in Art. 16, which are convergent for all values of  $u$ , real or complex. Thus the definitions of  $\cosh(x + iy)$ ,  $\sinh(x + iy)$  are to be

$$\left. \begin{aligned} \cosh(x + iy) &= 1 + \frac{1}{2!}(x + iy)^2 + \frac{1}{4!}(x + iy)^4 + \dots, \\ \sinh(x + iy) &= (x + iy) + \frac{1}{3!}(x + iy)^3 + \dots \end{aligned} \right\} (52)$$

From these series the numerical values of  $\cosh(x + iy)$ ,  $\sinh(x + iy)$  could be computed to any degree of approximation, when  $x$  and  $y$  are given. In general the results will come out in the complex form\*

$$\begin{aligned} \cosh(x + iy) &= a + ib, \\ \sinh(x + iy) &= c + id. \end{aligned}$$

The other functions are defined as in Art. 7, eq. (9).

Prob. 79. Prove from these definitions that, whatever  $u$  may be,

$$\cosh(-u) = \cosh u, \quad \sinh(-u) = -\sinh u,$$

$$\frac{d}{du} \cosh u = \sinh u, \quad \frac{d}{du} \sinh u = \cosh u,$$

$$\frac{d^2}{du^2} \cosh mu = m^2 \cosh mu, \quad \frac{d^2}{du^2} \sinh mu = m^2 \sinh mu. \dagger$$

\* It is to be borne in mind that the symbols  $\cosh$ ,  $\sinh$ , here stand for algebraic operators which convert one number into another; or which, in the language of vector-analysis change one vector into another, by stretching and turning.

† The generalized hyperbolic functions usually present themselves in Mathematical Physics as the solution of the differential equation  $d^2\phi/du^2 = m^2\phi$ , where  $\phi$ ,  $m$ ,  $u$  are complex numbers, the measures of vector quantities. (See Art. 37.)

## ART. 28. ADDITION-THEOREMS FOR COMPLEXES.

The addition-theorems for  $\cosh(u + v)$ , etc., where  $u, v$  are complex numbers, may be derived as follows. First take  $u, v$  as real numbers, then, by Art. 11,

$$\cosh(u + v) = \cosh u \cosh v + \sinh u \sinh v;$$

$$\begin{aligned} \text{hence } 1 + \frac{1}{2!}(u + v)^2 + \dots &= \left(1 + \frac{1}{2!}u^2 + \dots\right) \left(1 + \frac{1}{2!}v^2 + \dots\right) \\ &+ \left(u + \frac{1}{3!}u^3 + \dots\right) \left(v + \frac{1}{3!}v^3 + \dots\right) \end{aligned}$$

This equation is true when  $u, v$  are any real numbers. It must, then, be an algebraic identity. For, compare the terms of the  $r$ th degree in the letters  $u, v$  on each side. Those on the left are  $\frac{1}{r!}(u + v)^r$ ; and those on the right, when collected, form an  $r$ th-degree function which is numerically equal to the former for more than  $r$  values of  $u$  when  $v$  is constant, and for more than  $r$  values of  $v$  when  $u$  is constant. Hence the terms of the  $r$ th degree on each side are algebraically identical functions of  $u$  and  $v$ .\* Similarly for the terms of any other degree. Thus the equation above written is an algebraic identity, and is true for all values of  $u, v$ , whether real or complex. Then writing for each side its symbol, it follows that

$$\cosh(u + v) = \cosh u \cosh v + \sinh u \sinh v; \quad (53)$$

and by changing  $v$  into  $-v$ ,

$$\cosh(u - v) = \cosh u \cosh v - \sinh u \sinh v. \quad (54)$$

In a similar manner is found

$$\sinh(u \pm v) = \sinh u \cosh v \pm \cosh u \sinh v. \quad (55)$$

In particular, for a complex argument,

$$\left. \begin{aligned} \cosh(x \pm iy) &= \cosh x \cosh iy \pm \sinh x \sinh iy, \\ \sinh(x \pm iy) &= \sinh x \cosh iy \pm \cosh x \sinh iy. \end{aligned} \right\} \quad (56)$$

\* "If two  $r$ th-degree functions of a single variable be equal for more than  $r$  values of the variable, then they are equal for all values of the variable, and are algebraically identical."

Prob. 79. Show, by a similar process of generalization,\* that if  $\sin u$ ,  $\cos u$ ,  $\exp u$  † be defined by their developments in powers of  $u$ , then, whatever  $u$  may be,

$$\sin(u + v) = \sin u \cos v + \cos u \sin v,$$

$$\cos(u + v) = \cos u \cos v - \sin u \sin v,$$

$$\exp(u + v) = \exp u \exp v.$$

Prob. 80. Prove that the following are identities:

$$\cosh^2 u - \sinh^2 u = 1,$$

$$\cosh u + \sinh u = \exp u,$$

$$\cosh u - \sinh u = \exp(-u),$$

$$\cosh u = \frac{1}{2}[\exp u + \exp(-u)],$$

$$\sinh u = \frac{1}{2}[\exp u - \exp(-u)].$$

## ART. 29. FUNCTIONS OF PURE IMAGINARIES.

In the defining identities

$$\cosh u = 1 + \frac{1}{2!}u^2 + \frac{1}{4!}u^4 + \dots,$$

$$\sinh u = u + \frac{1}{3!}u^3 + \frac{1}{5!}u^5 + \dots,$$

put for  $u$  the pure imaginary  $iy$ , then

$$\cosh iy = 1 - \frac{1}{2!}y^2 + \frac{1}{4!}y^4 - \dots = \cos y, \quad (57)$$

$$\begin{aligned} \sinh iy &= iy + \frac{1}{3!}(iy)^3 + \frac{1}{5!}(iy)^5 + \dots \\ &= i \left[ y - \frac{1}{3!}y^3 + \frac{1}{5!}y^5 - \dots \right] = i \sin y, \end{aligned} \quad (58)$$

$$\text{and, by division, } \tanh iy = i \tan y. \quad (59)$$

\* This method of generalization is sometimes called the principle of the "permanence of equivalence of forms." It is not, however, strictly speaking, a "principle," but a method; for, the validity of the generalization has to be demonstrated, for any particular form, by means of the principle of the algebraic identity of polynomials enunciated in the preceding foot-note. (See *Annals of Mathematics*, Vol. 6, p. 81.)

† The symbol  $\exp u$  stands for "exponential function of  $u$ ," which is identical with  $e^u$  when  $u$  is real.

These formulas serve to interchange hyperbolic and circular functions. The hyperbolic cosine of a pure imaginary is real, and the hyperbolic sine and tangent are pure imaginaries.

The following table exhibits the variation of  $\sinh u$ ,  $\cosh u$ ,  $\tanh u$ ,  $\exp u$ , as  $u$  takes a succession of pure imaginary values.

$u$	$\sinh u$	$\cosh u$	$\tanh u$	$\exp u$
0	0	1	0	1
$\frac{1}{4}i\pi$	$.7i$	$.7^*$	$i$	$.7(1+i)$
$\frac{1}{2}i\pi$	$i$	0	$\infty i$	$i$
$\frac{3}{4}i\pi$	$.7i$	$-.7$	$-i$	$.7(1-i)$
$i\pi$	0	$-1$	0	$-1$
$\frac{5}{4}i\pi$	$-.7i$	$-.7$	$i$	$-.7(1+i)$
$\frac{3}{2}i\pi$	$-i$	0	$\infty i$	$-i$
$\frac{7}{4}i\pi$	$-.7i$	$.7$	$-i$	$.7(1-i)$
$2i\pi$	0	1	0	1

\* In this table  $.7$  is written for  $\frac{1}{2}\sqrt{2}$ , =  $.707\dots$

Prob. 81. Prove the following identities :

$$\cos y = \cosh iy = \frac{1}{2}[\exp iy + \exp(-iy)],$$

$$\sin y = \frac{1}{i} \sinh iy = \frac{1}{2i}[\exp iy - \exp(-iy)],$$

$$\cos y + i \sin y = \cosh iy + \sinh iy = \exp iy,$$

$$\cos y - i \sin y = \cosh iy - \sinh iy = \exp(-iy),$$

$$\cos iy = \cosh y, \quad \sin iy = i \sinh y.$$

Prob. 82. Equating the respective real and imaginary parts on each side of the equation  $\cos ny + i \sin ny = (\cos y + i \sin y)^n$ , express  $\cos ny$  in powers of  $\cos y$ ,  $\sin y$ ; and hence derive the corresponding expression for  $\cosh ny$ .

Prob. 83. Show that, in the identities (57) and (58),  $y$  may be replaced by a general complex, and hence that

$$\sinh(x \pm iy) = \pm i \sin(y \mp ix),$$

$$\begin{aligned}\cosh(x \pm iy) &= \cos(y \mp ix), \\ \sin(x \pm iy) &= \pm i \sinh(y \mp ix), \\ \cos(x \pm iy) &= \cosh(y \mp ix).\end{aligned}$$

Prob. 84. From the product-series for  $\sin x$  derive that for  $\sinh x$ :

$$\begin{aligned}\sin x &= x \left(1 - \frac{x^2}{\pi^2}\right) \left(1 - \frac{x^2}{2^2 \pi^2}\right) \left(1 - \frac{x^2}{3^2 \pi^2}\right) \cdots, \\ \sinh x &= x \left(1 + \frac{x^2}{\pi^2}\right) \left(1 + \frac{x^2}{2^2 \pi^2}\right) \left(1 + \frac{x^2}{3^2 \pi^2}\right) \cdots\end{aligned}$$

ART. 30. FUNCTIONS OF  $x + iy$  IN THE FORM  $X + iY$ .

By the addition-formulas,

$$\begin{aligned}\cosh(x + iy) &= \cosh x \cosh iy + \sinh x \sinh iy, \\ \sinh(x + iy) &= \sinh x \cosh iy + \cosh x \sinh iy,\end{aligned}$$

but  $\cosh iy = \cos y$ ,  $\sinh iy = i \sin y$ ,

$$\text{hence } \left. \begin{aligned}\cosh(x + iy) &= \cosh x \cos y + i \sinh x \sin y, \\ \sinh(x + iy) &= \sinh x \cos y + i \cosh x \sin y.\end{aligned} \right\} \quad (60)$$

Thus if  $\cosh(x + iy) = a + ib$ ,  $\sinh(x + iy) = c + id$ , then

$$\left. \begin{aligned}a &= \cosh x \cos y, & b &= \sinh x \sin y, \\ c &= \sinh x \cos y, & d &= \cosh x \sin y.\end{aligned} \right\} \quad (61)$$

From these expressions the complex tables at the end of this chapter have been computed.

Writing  $\cosh z = Z$ , where  $z = x + iy$ ,  $Z = X + iY$ ; let the complex numbers  $z$ ,  $Z$  be represented on Argand diagrams, in the usual way, by the points whose coordinates are  $(x, y)$ ,  $(X, Y)$ ; and let the point  $z$  move parallel to the  $y$ -axis, on a given line  $x = m$ , then the point  $Z$  will describe an ellipse whose equation, obtained by eliminating  $y$  between the equations  $X = \cosh m \cos y$ ,  $Y = \sinh m \sin y$ , is

$$\frac{X^2}{(\cosh m)^2} + \frac{Y^2}{(\sinh m)^2} = 1,$$

and which, as the parameter  $m$  varies, represents a series of confocal ellipses, the distance between whose foci is unity.

Similarly, if the point  $z$  move parallel to the  $x$ -axis, on a given line  $y = n$ , the point  $Z$  will describe an hyperbola whose equation, obtained by eliminating the variable  $x$  from the equations  $X = \cosh x \cos n$ ,  $Y = \sinh x \sin n$ , is

$$\frac{X^2}{(\cos n)^2} - \frac{Y^2}{(\sin n)^2} = 1,$$

and which, as the parameter  $n$  varies, represents a series of hyperbolas confocal with the former series of ellipses.

These two systems of curves, when accurately drawn at close intervals on the  $Z$  plane, constitute a chart of the hyperbolic cosine; and the numerical value of  $\cosh(m + in)$  can be read off at the intersection of the ellipse whose parameter is  $m$  with the hyperbola whose parameter is  $n$ .\*

Prob. 85. Prove that, in the case of  $\sinh(x + iy)$ , the above two systems of curves are each turned through a right angle. Compare the chart of  $\sin(x + iy)$ , and also of  $\cos(x + iy)$ .

Prob. 86. Prove the identity  $\tan(x + iy) = \frac{\sinh 2x + i \sin 2y}{\cosh 2x + \cos 2y}$ .

Prob. 87. If  $\cosh(x + iy) = a + ib$ , be written in the "modulus and amplitude" form as  $r(\cos \theta + i \sin \theta)$ ,  $= r \exp i\theta$ , then

$$r^2 = a^2 + b^2 = \cosh^2 x - \sin^2 y = \cos^2 y - \sinh^2 x, \\ \tan \theta = b/a = \tanh x \tan y.$$

Prob. 88. Find the modulus and amplitude of  $\sinh(x + iy)$ ,  $\sin(x + iy)$ ,  $\exp(x + iy)$ .

Prob. 89. The functions  $\sinh u$ ,  $\cosh u$  have the pure imaginary period  $2i\pi$ ; that is,  $\sinh(u + 2i\pi) = \sinh u$ ,  $\cosh(u + 2i\pi) = \cosh u$ ; also  $\sinh(u + \frac{1}{2}i\pi) = i \cosh u$ ,  $\cosh(u + \frac{1}{2}i\pi) = i \sinh u$ ,  $\sinh(u + i\pi) = -\sinh u$ ,  $\cosh(u + i\pi) = -\cosh u$ .

Prob. 90. The functions  $\cosh^{-1}m$ ,  $\sinh^{-1}m$  have multiple values at intervals of  $2i\pi$ , but each has a unique value (called the principal value) in which the coefficient of  $i$  lies between 0 and  $\pi$  for the former, and between  $-\frac{1}{2}\pi$  and  $+\frac{1}{2}\pi$  for the latter.

\* Such a chart is given by Kennelly, Proc. A. I. E. E., April 1895, and is used by him to obtain the numerical values of  $\cosh(x + iy)$ ,  $\sinh(x + iy)$ , which present themselves as the measures of certain vector quantities in the theory of alternating currents. (See Art. 37.) The chart is constructed for values of  $x$  and of  $y$  between 0 and 1.2; but it is available for all values of  $y$ , on account of the periodicity of the functions.

## ART. 31. THE CATENARY.

A flexible inextensible string is suspended from two fixed points, and takes up a position of equilibrium under the action of gravity. It is required to find the equation of the curve in which it hangs.

Let  $w$  be the weight of unit length, and  $s$  the length of arc  $AP$  measured from the lowest point  $A$ ; then  $ws$  is the weight of the portion  $AP$ . This is balanced by the terminal tensions,  $T$  acting in the tangent line at  $P$ , and  $H$  in the horizontal tangent. Resolving horizontally and vertically gives

$$T \cos \phi = H, \quad T \sin \phi = ws,$$

in which  $\phi$  is the inclination of the tangent at  $P$ ; hence

$$\tan \phi = \frac{ws}{H} = \frac{s}{c},$$

where  $c$  is written for  $H/w$ , the length whose weight is the constant horizontal tension; therefore

$$\frac{dy}{dx} = \frac{s}{c}, \quad \frac{ds}{dx} = \sqrt{1 + \frac{s^2}{c^2}}, \quad \frac{dx}{c} = \frac{ds}{\sqrt{s^2 + c^2}},$$

$$\frac{x}{c} = \sinh^{-1} \frac{s}{c}, \quad \sinh \frac{x}{c} = \frac{s}{c} = \frac{dy}{dx}, \quad \frac{y}{c} = \cosh \frac{x}{c},$$

which is the required equation of the catenary, referred to an axis of  $x$  drawn at a distance  $c$  below  $A$ .

The following trigonometric method illustrates the use of the gudermanian: The "intrinsic equation,"  $s = c \tan \phi$ , gives  $ds = c \sec^2 \phi d\phi$ ; hence  $dx = ds \cos \phi = c \sec \phi d\phi$ ;  $dy = ds \sin \phi = c \sec \phi \tan \phi d\phi$ ; thus  $x = c \operatorname{gd}^{-1} \phi$ ,  $y = c \sec \phi$ ; whence  $y/c = \sec \phi = \sec \operatorname{gd} x/c = \cosh x/c$ ; and

$$s/c = \tan \operatorname{gd} x/c = \sinh x/c.$$

Numerical Exercise.—A chain whose length is 30 feet is suspended from two points 20 feet apart in the same horizontal; find the parameter  $c$ , and the depth of the lowest point.

The equation  $s/c = \sinh x/c$  gives  $15/c = \sinh 10/c$ , which, by putting  $10/c = z$ , may be written  $1.5z = \sinh z$ . By examining the intersection of the graphs of  $y = \sinh z$ ,  $y = 1.5z$ , it appears that the root of this equation is  $z = 1.6$ , nearly. To find a closer approximation to the root, write the equation in the form  $f(z) = \sinh z - 1.5z = 0$ , then, by the tables,

$$f(1.60) = 2.3756 - 2.4000 = - .0244,$$

$$f(1.62) = 2.4276 - 2.4300 = - .0024,$$

$$f(1.64) = 2.4806 - 2.4600 = + .0206;$$

whence, by interpolation, it is found that  $f(1.6221) = 0$ , and  $z = 1.6221$ ,  $c = 10/z = 6.1649$ . The ordinate of either of the fixed points is given by the equation

$$y/c = \cosh x/c = \cosh 10/c = \cosh 1.6221 = 2.6306,$$

from tables; hence  $y = 16.2174$ , and required depth of the vertex  $= y - c = 10.0525$  feet.\*

Prob. 91. In the above numerical problem, find the inclination of the terminal tangent to the horizon.

Prob. 92. If a perpendicular  $MN$  be drawn from the foot of the ordinate to the tangent at  $P$ , prove that  $MN$  is equal to the constant  $c$ , and that  $NP$  is equal to the arc  $AP$ . Hence show that the locus of  $N$  is the involute of the catenary, and has the property that the length of the tangent, from the point of contact to the axis of  $x$ , is constant. (This is the characteristic property of the tractory).

Prob. 93. The tension  $T$  at any point is equal to the weight of a portion of the string whose length is equal to the ordinate  $y$  of that point.

Prob. 94. An arch in the form of an inverted catenary † is 30 feet wide and 10 feet high; show that the length of the arch can be obtained from the equations  $\cosh z - \frac{2}{3}z = 1$ ,  $2s = \frac{30}{z} \sinh z$ .

\* See a similar problem in Chap. I, Art. 7.

† For the theory of this form of arch, see "Arch" in the Encyclopædia Britannica.



## ART. 32. CATENARY OF UNIFORM STRENGTH.

If the area of the normal section at any point be made proportional to the tension at that point, there will then be a constant tension per unit of area, and the tendency to break will be the same at all points. To find the equation of the curve of equilibrium under gravity, consider the equilibrium of an element  $PP'$  whose length is  $ds$ , and whose weight is  $g\rho\omega ds$ , where  $\omega$  is the section at  $P$ , and  $\rho$  the uniform density. This weight is balanced by the difference of the vertical components of the tensions at  $P$  and  $P'$ , hence

$$d(T \sin \phi) = g\rho\omega ds,$$

$$d(T \cos \phi) = 0;$$

therefore  $T \cos \phi = H$ , the tension at the lowest point, and  $T = H \sec \phi$ . Again, if  $\omega_0$  be the section at the lowest point, then by hypothesis  $\omega/\omega_0 = T/H = \sec \phi$ , and the first equation becomes

$$Hd(\sec \phi \sin \phi) = g\rho\omega_0 \sec \phi ds,$$

or 
$$c d \tan \phi = \sec \phi ds,$$

where  $c$  stands for the constant  $H/g\rho\omega_0$ , the length of string (of section  $\omega_0$ ) whose weight is equal to the tension at the lowest point; hence,

$$ds = c \sec \phi d\phi, \quad s/c = \text{gd}^{-1}\phi,$$

the intrinsic equation of the catenary of uniform strength.

Also  $dx = ds \cos \phi = c d\phi$ ,  $dy = ds \sin \phi = c \tan \phi d\phi$ ;

hence  $x = c\phi$ ,  $y = c \log \sec \phi$ ,

and thus the Cartesian equation is

$$y/c = \log \sec x/c,$$

in which the axis of  $x$  is the tangent at the lowest point.

Prob. 95. Using the same data as in Art. 31, find the parameter  $c$  and the depth of the lowest point. (The equation  $x/c = \text{gd } s/c$  gives  $10/c = \text{gd } 15/c$ , which, by putting  $15/c = z$ , becomes

$\operatorname{gd} z = \frac{2}{3}z$ . From the graph it is seen that  $z$  is nearly 1.7. If  $f(z) = \operatorname{gd} z - \frac{2}{3}z$ , then, from the tables of the gudermanian at the end of this chapter,

$$f(1.70) = 1.1780 - 1.1333 = +.0447,$$

$$f(1.75) = 1.1796 - 1.1667 = +.0129,$$

$$f(1.80) = 1.1804 - 1.2000 = -.0196,$$

whence, by interpolation,  $z = 1.7698$  and  $c = 8.4755$ . Again,  $y/c = \log_e \sec x/c$ ; but  $x/c = 10/c = 1.1799$ ; and 1.1799 radians =  $67^\circ 36' 29''$ ; hence  $y = 8.4755 \times .41914 \times 2.3026 = 8.1798$ , the required depth.)

Prob. 96. Find the inclination of the terminal tangent.

Prob. 97. Show that the curve has two vertical asymptotes.

Prob. 98. Prove that the law of the tension  $T$ , and of the section  $\omega$ , at a distance  $s$ , measured from the lowest point along the curve, is

$$\frac{T}{H} = \frac{\omega}{\omega_0} = \cosh \frac{s}{c};$$

and show that in the above numerical example the terminal section is 2.85 times the minimum section.

Prob. 99. Prove that the radius of curvature is given by  $\rho = c \cosh s/c$ . Also that the weight of the arc  $s$  is given by  $W = H \sinh s/c$ , in which  $s$  is measured from the vertex.

### ART. 33. THE ELASTIC CATENARY.

An elastic string of uniform section and density in its natural state is suspended from two points. Find its equation of equilibrium.

Let the element  $d\sigma$  stretch into  $ds$ ; then, by Hooke's law,  $ds = d\sigma(1 + \lambda T)$ , where  $\lambda$  is the elastic constant of the string; hence the weight of the stretched element  $ds$ ,  $= g\rho\omega ds$ ,  $= g\rho\omega ds/(1 + \lambda T)$ . Accordingly, as before,

$$d(T \sin \phi) = g\rho\omega ds/(1 + \lambda T),$$

and  $T \cos \phi = H = g\rho\omega c$ ,

hence  $c d(\tan \phi) = ds/(1 + \mu \sec \phi)$ ,

in which  $\mu$  stands for  $\lambda H$ , the extension at the lowest point;

therefore  $ds = c(\sec^2 \phi + \mu \sec^3 \phi)d\phi$ ,

$$s/c = \tan \phi + \frac{1}{2}\mu(\sec \phi \tan \phi + \text{gd}^{-1} \phi),$$

which is the intrinsic equation of the curve, and reduces to that of the common catenary when  $\mu = 0$ . The coordinates  $x, y$  may be expressed in terms of the single parameter  $\phi$  by putting  $dx = ds \cos \phi = c(\sec \phi + \mu \sec^2 \phi)d\phi$ ,

$dy = ds \sin \phi = c(\sec^2 \phi + \mu \sec^3 \phi) \sin \phi d\phi$ . Whence

$$x/c = \text{gd}^{-1} \phi + \mu \tan \phi, \quad y/c = \sec \phi + \frac{1}{2}\mu \tan^2 \phi.$$

These equations are more convenient than the result of eliminating  $\phi$ , which is somewhat complicated.

#### ART. 34. THE TRACTORY.\*

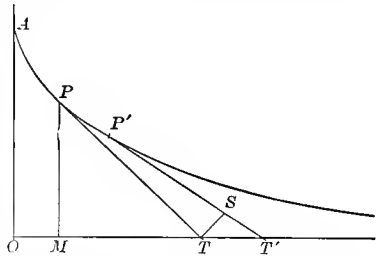
To find the equation of the curve which possesses the property that the length of the tangent from the point of contact to the axis of  $x$  is constant.

Let  $PT, P'T'$  be two consecutive tangents such that  $PT = P'T' = c$ , and let  $OT = t$ ; draw  $TS$  perpendicular to  $P'T'$ ; then if  $PP' = ds$ , it is evident that  $ST'$  differs from  $ds$  by an infinitesimal of a higher order. Let  $PT$  make an angle  $\phi$  with  $OA$ , the axis of  $y$ ; then (to the first order of infinitesimals)  $PTd\phi = TS = TT' \cos \phi$ ; that is,

$$c d\phi = \cos \phi dt, \quad t = c \text{gd}^{-1} \phi,$$

$$x = t - c \sin \phi = c(\text{gd}^{-1} \phi - \sin \phi), \quad y = c \cos \phi.$$

This is a convenient single-parameter form, which gives all



\* This curve is used in Schiele's anti-friction pivot (Minchin's Statics, Vol. I, p. 242); and in the theory of the skew circular arch, the horizontal projection of the joints being a tractrix. (See "Arch," Encyclopædia Britannica.) The equation  $\phi = \text{gd } t/c$  furnishes a convenient method of plotting the curve.

values of  $x, y$  as  $\phi$  increases from 0 to  $\frac{1}{2}\pi$ . The value of  $s$ , expressed in the same form, is found from the relation

$$ds = ST' = dt \sin \phi = c \tan \phi d\phi, \quad s = c \log_e \sec \phi.$$

At the point  $A$ ,  $\phi = 0$ ,  $x = 0$ ,  $s = 0$ ,  $t = 0$ ,  $y = c$ . The Cartesian equation, obtained by eliminating  $\phi$ , is

$$\frac{x}{c} = \text{gd}^{-1} \left( \cos^{-1} \frac{y}{c} \right) - \sin \left( \cos^{-1} \frac{y}{c} \right) = \cosh^{-1} \frac{c}{y} - \sqrt{1 - \frac{y^2}{c^2}}.$$

If  $u$  be put for  $t/c$ , and be taken as independent variable,  $\phi = \text{gd } u$ ,  $x/c = u - \tanh u$ ,  $y/c = \text{sech } u$ ,  $s/c = \log \cosh u$ .

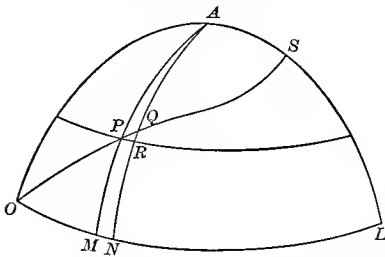
Prob. 100. Given  $t = 2c$ , show that  $\phi = 75^\circ 35'$ ,  $s = 1.3249c$ ,  $y = .2658c$ ,  $x = 1.0360c$ . At what point is  $t = c$ ?

Prob. 101. Show that the evolute of the tractory is the catenary. (See Prob. 92.)

Prob. 102. Find the radius of curvature of the tractory in terms of  $\phi$ ; and derive the intrinsic equation of the involute.

### ART. 35. THE LOXODROME.

On the surface of a sphere a curve starts from the equator in a given direction and cuts all the meridians at the same angle. To find its equation in latitude-and-longitude coordinates :



Let the loxodrome cross two consecutive meridians  $AM, AN$  in the points  $P, Q$ ; let  $PR$  be a parallel of latitude; let  $OM = x$ ,  $MP = y$ ,  $MN = dx$ ,  $RQ = dy$ , all in radian measure; and let the angle  $MOP = RPQ = \alpha$ ; then

$$\tan \alpha = RQ/PR, \quad \text{but} \quad PR = MN \cos MP,*$$

hence  $dx \tan \alpha = dy \sec y$ , and  $x \tan \alpha = \text{gd}^{-1} y$ , there being no integration-constant since  $y$  vanishes with  $x$ ; thus the required equation is

$$y = \text{gd} (x \tan \alpha).$$

\* Jones, Trigonometry (Ithaca, 1890), p. 185.

To find the length of the arc  $OP$ : Integrate the equation

$$ds = dy \csc \alpha, \quad \text{whence } s = y \csc \alpha.$$

To illustrate numerically, suppose a ship sails northeast, from a point on the equator, until her difference of longitude is  $45^\circ$ , find her latitude and distance:

Here  $\tan \alpha = 1$ , and  $y = \text{gd } x = \text{gd } \frac{1}{4}\pi = \text{gd } (.7854) = .7152$  radians:  $s = y \sqrt{2} = 1.0114$  radii. The latitude in degrees is  $40.980$ .

If the ship set out from latitude  $y_1$ , the formula must be modified as follows: Integrating the above differential equation between the limits  $(x_1, y_1)$  and  $(x_2, y_2)$  gives

$$(x_2 - x_1) \tan \alpha = \text{gd}^{-1}y_2 - \text{gd}^{-1}y_1;$$

hence  $\text{gd}^{-1}y_2 = \text{gd}^{-1}y_1 + (x_2 - x_1) \tan \alpha$ , from which the final latitude can be found when the initial latitude and the difference of longitude are given. The distance sailed is equal to  $(y_2 - y_1) \csc \alpha$  radii, a radius being  $60 \times 180/\pi$  nautical miles.

Mercator's Chart.—In this projection the meridians are parallel straight lines, and the loxodrome becomes the straight line  $y' = x \tan \alpha$ , hence the relations between the coordinates of corresponding points on the plane and sphere are  $x' = x$ ,  $y' = \text{gd}^{-1}y$ . Thus the latitude  $y$  is magnified into  $\text{gd}^{-1}y$ , which is tabulated under the name of "meridional part for latitude  $y$ "; the values of  $y$  and of  $y'$  being given in minutes. A chart constructed accurately from the tables can be used to furnish graphical solutions of problems like the one proposed above.

Prob. 103. Find the distance on a rhumb line between the points  $(30^\circ \text{ N}, 20^\circ \text{ E})$  and  $(30^\circ \text{ S}, 40^\circ \text{ E})$ .

### ART. 36. COMBINED FLEXURE AND TENSION.

A beam that is built-in at one end carries a load  $P$  at the other, and is also subjected to a horizontal tensile force  $Q$  applied at the same point; to find the equation of the curve assumed by its neutral surface: Let  $x, y$  be any point of the

elastic curve, referred to the free end as origin, then the bending moment for this point is  $Qy - Px$ . Hence, with the usual notation of the theory of flexure,\*

$$EI \frac{d^2y}{dx^2} = Qy - Px, \quad \frac{d^2y}{dx^2} = n^2(y - mx), \quad \left[ m = \frac{P}{Q}, \quad n^2 = \frac{Q}{EI} \right]$$

which, on putting  $y - mx = u$ , and  $d^2y/dx^2 = d^2u/dx^2$ , becomes

$$\frac{d^2u}{dx^2} = n^2u,$$

whence  $u = A \cosh nx + B \sinh nx$ ,

that is,  $y = mx + A \cosh nx + B \sinh nx$ .

The arbitrary constants  $A, B$  are to be determined by the terminal conditions. At the free end  $x = 0, y = 0$ ; hence  $A$  must be zero, and

$$y = mx + B \sinh nx, \\ \frac{dy}{dx} = m + nB \cosh nx;$$

but at the fixed end,  $x = l$ , and  $dy/dx = 0$ , hence

$$B = -m/n \cosh nl,$$

and accordingly

$$y = mx - \frac{m \sinh nx}{n \cosh nl}.$$

To obtain the deflection of the loaded end, find the ordinate of the fixed end by putting  $x = l$ , giving

$$\text{deflection} = m \left( l - \frac{1}{n} \tanh nl \right).$$

Prob. 104. Compute the deflection of a cast-iron beam,  $2 \times 2$  inches section, and 6 feet span, built-in at one end and carrying a load of 100 pounds at the other end, the beam being subjected to a horizontal tension of 8000 pounds. [In this case  $I = 4/3$ ,  $E = 15 \times 10^6$ ,  $Q = 8000$ ,  $P = 100$ ; hence  $n = 1/50$ ,  $m = 1/80$ , deflection =  $\frac{1}{80}(72 - 50 \tanh 1.44) = \frac{1}{80}(72 - 44.69) = .341$  inches.]

\* Merriman, *Mechanics of Materials* (New York, 1895), pp. 70-77, 267-269.

Prob. 105. If the load be uniformly distributed over the beam, say  $w$  per linear unit, prove that the differential equation is

$$EI \frac{d^2 y}{dx^2} = Qy - \frac{1}{2}wx^2, \quad \text{or} \quad \frac{d^2 y}{dx^2} = n^2(y - mx^2),$$

and that the solution is  $y = A \cosh nx + B \sinh nx + mx^2 + \frac{2m}{n^2}$ .

Show also how to determine the arbitrary constants.

### ART. 37. ALTERNATING CURRENTS.\*

In the general problem treated the cable or wire is regarded as having resistance, distributed capacity, self-induction, and leakage; although some of these may be zero in special cases. The line will also be considered to feed into a receiver circuit of any description; and the general solution will include the particular cases in which the receiving end is either grounded or insulated. The electromotive force may, without loss of generality, be taken as a simple harmonic function of the time, because any periodic function can be expressed in a Fourier series of simple harmonics.† The E.M.F. and the current, which may differ in phase by any angle, will be supposed to have given values at the terminals of the receiver circuit; and the problem then is to determine the E.M.F. and current that must be kept up at the generator terminals; and also to express the values of these quantities at any intermediate point, distant  $x$  from the receiving end; the four line-constants being supposed known, viz.:

$R$  = resistance, in ohms per mile,

$L$  = coefficient of self-induction, in henrys per mile,

$C$  = capacity, in farads per mile,

$G$  = coefficient of leakage, in mhos per mile.‡

It is shown in standard works § that if any simple harmonic

\* See references in foot-note Art. 27.

† Chapter V, Art. 8.

‡ Kennelly denotes these constants by  $r, l, c, g$ . Steinmetz writes  $s$  for  $\omega L$ ,  $\kappa$  for  $\omega C$ ,  $\theta$  for  $G$ , and he uses  $C$  for current.

§ Thomson and Tait, Natural Philosophy, Vol. I. p. 40; Rayleigh, Theory of Sound, Vol. I. p. 20; Bedell and Crehore, Alternating Currents, p. 214.

function  $a \sin(\omega t + \theta)$  be represented by a vector of length  $a$  and angle  $\theta$ , then two simple harmonics of the same period  $2\pi/\omega$ , but having different values of the phase-angle  $\theta$ , can be combined by adding their representative vectors. Now the E.M.F. and the current at any point of the circuit, distant  $x$  from the receiving end, are of the form

$$e = e_1 \sin(\omega t + \theta), \quad i = i_1 \sin(\omega t + \theta'), \quad (64)$$

in which the maximum values  $e_1, i_1$ , and the phase-angles  $\theta, \theta'$ , are all functions of  $x$ . These simple harmonics will be represented by the vectors  $e_1/\theta, i_1/\theta'$ ; whose numerical measures are the complexes  $e_1(\cos \theta + j \sin \theta)^*$ ,  $i_1(\cos \theta' + j \sin \theta')$ , which will be denoted by  $\bar{e}, \bar{i}$ . The relations between  $\bar{e}$  and  $\bar{i}$  may be obtained from the ordinary equations †

$$\frac{di}{dx} = Ge + C \frac{de}{dt}, \quad \frac{de}{dx} = Ri + L \frac{di}{dt}; \quad (65)$$

for, since  $de/dt = \omega e_1 \cos(\omega t + \theta) = \omega e_1 \sin(\omega t + \theta + \frac{1}{2}\pi)$ , then  $de/dt$  will be represented by the vector  $\omega e_1 / \theta + \frac{1}{2}\pi$ ; and  $di/dx$  by the sum of the two vectors  $Ge_1 / \theta, C\omega e_1 / \theta + \frac{1}{2}\pi$ ; whose numerical measures are the complexes  $G\bar{e}, j\omega C\bar{e}$ ; and similarly for  $de/dx$  in the second equation; thus the relations between the complexes  $\bar{e}, \bar{i}$  are

$$\frac{d\bar{i}}{dx} = (G + j\omega C)\bar{e}, \quad \frac{d\bar{e}}{dx} = (R + j\omega L)\bar{i}. \quad (66) \ddagger$$

\* In electrical theory the symbol  $j$  is used, instead of  $i$ , for  $\sqrt{-1}$ .

† Bedell and Crehore, *Alternating Currents*, p. 181. The sign of  $dx$  is changed, because  $x$  is measured from the receiving end. The coefficient of leakage,  $G$ , is usually taken zero, but is here retained for generality and symmetry.

‡ These relations have the advantage of not involving the time. Steinmetz derives them from first principles without using the variable  $t$ . For instance, he regards  $R + j\omega L$  as a generalized resistance-coefficient, which, when applied to  $i$ , gives an E.M.F., part of which is in phase with  $i$ , and part in quadrature with  $i$ . Kennelly calls  $R + j\omega L$  the conductor impedance; and  $G + j\omega C$  the dielectric admittance; the reciprocal of which is the dielectric impedance.



Differentiating and substituting give

$$\left. \begin{aligned} \frac{d^2 \bar{e}}{dx^2} &= (R + j\omega L)(G + j\omega C)\bar{e}, \\ \frac{d^2 \bar{i}}{dx^2} &= (R + j\omega L)(G + j\omega C)\bar{i}, \end{aligned} \right\} \quad (67)$$

and thus  $\bar{e}$ ,  $\bar{i}$  are similar functions of  $x$ , to be distinguished only by their terminal values.

It is now convenient to define two constants  $m$ ,  $m_1$  by the equations\*

$$m^2 = (R + j\omega L)(G + j\omega C), \quad m_1^2 = (R + j\omega L)/(G + j\omega C); \quad (68)$$

and the differential equations may then be written

$$\frac{d^2 \bar{e}}{dx^2} = m^2 \bar{e}, \quad \frac{d^2 \bar{i}}{dx^2} = m^2 \bar{i}, \quad (69)$$

the solutions of which are †

$$\bar{e} = A \cosh mx + B \sinh mx, \quad \bar{i} = A' \cosh mx + B' \sinh mx,$$

wherein only two of the four constants are arbitrary; for substituting in either of the equations (66), and equating coefficients, give

$$(G + j\omega C)A = mB', \quad (G + j\omega C)B = mA',$$

whence  $B' = A/m_1, \quad A' = B/m_1.$

Next let the assigned terminal values of  $\bar{e}$ ,  $\bar{i}$ , at the receiver, be denoted by  $\bar{E}$ ,  $\bar{I}$ ; then putting  $x = 0$  gives  $\bar{E} = A$ ,  $\bar{I} = A'$ , whence  $B = m_1 \bar{I}$ ,  $B' = \bar{E}/m_1$ ; and thus the general solution is

$$\left. \begin{aligned} \bar{e} &= \bar{E} \cosh mx + m_1 \bar{I} \sinh mx, \\ \bar{i} &= \bar{I} \cosh mx + \frac{1}{m_1} \bar{E} \sinh mx. \end{aligned} \right\} \quad (70)$$

\* The complex constants  $m$ ,  $m_1$ , are written  $z$ ,  $y$  by Kennelly; and the variable length  $x$  is written  $L_2$ . Steinmetz writes  $v$  for  $m$ .

† See Art. 14, Probs. 28-30; and Art. 27, foot-note.

If desired, these expressions could be thrown into the ordinary complex form  $X + jY$ ,  $X' + jY'$ , by putting for the letters their complex values, and applying the addition-theorems for the hyperbolic sine and cosine. The quantities  $X$ ,  $Y$ ,  $X'$ ,  $Y'$  would then be expressed as functions of  $x$ ; and the representative vectors of  $e$ ,  $i$ , would be  $e_1/\theta$ ,  $i_1/\theta'$ , where  $e_1^2 = X^2 + Y^2$ ,  $i_1^2 = X'^2 + Y'^2$ ,  $\tan \theta = Y/X$ ,  $\tan \theta' = Y'/X'$ .

For purposes of numerical computation, however, the formulas (70) are the most convenient, when either a chart,\* or a table,† of  $\cosh u$ ,  $\sinh u$ , is available, for complex values of  $u$ .

Prob. 106.‡ Given the four line-constants:  $R = 2$  ohms per mile,  $L = 20$  millihenrys per mile,  $C = 1/2$  microfarad per mile,  $G = 0$ ; and given  $\omega$ , the angular velocity of E.M.F. to be 2000 radians per second; then

$$\omega L = 40 \text{ ohms, conductor reactance per mile;}$$

$$R + j\omega L = 2 + 40j \text{ ohms, conductor impedance per mile;}$$

$$\omega C = .001 \text{ mho, dielectric susceptance per mile;}$$

$$G + j\omega C = .001j \text{ mho, dielectric admittance per mile;}$$

$$(G + j\omega C)^{-1} = -1000j \text{ ohms, dielectric impedance per mile;}$$

$$m^2 = (R + j\omega L)(G + j\omega C) = .04 + .002j, \text{ which is the measure of } .04005 / 177^\circ 8'; \text{ therefore}$$

$$m = \text{measure of } .2001 / 88^\circ 34' = .0050 + .2000j, \text{ an abstract coefficient per mile, of dimensions } [\text{length}]^{-1},$$

$$mm_1 = m / (G + j\omega C) = 200 - 5j \text{ ohms per mile.}$$

Next let the assigned terminals conditions at the receiver be:  $I = 0$  (line insulated); and  $E = 1000$  volts, whose phase may be taken as the standard (or zero) phase; then at any distance  $x$ , by (70),

$$\bar{e} = E \cosh mx, \quad \bar{i} = \frac{E}{m_1} \sinh mx,$$

in which  $mx$  is an abstract complex.

Suppose it is required to find the E.M.F. and current that must be kept up at a generator 100 miles away; then

\* Art. 30, foot-note.

† See Table II.

‡ The data for this example are taken from Kennelly's article.

$$\bar{e} = 1000 \cosh (.5 + 20j), \quad \bar{i} = 200(40 - j)^{-1} \sinh (.5 + 20j),$$

but, by Prob. 89,  $\cosh (.5 + 20j) = \cosh (.5 + 20j - 6\pi j)$

$$= \cosh (.5 + 1.15j) = .4600 + .4750j$$

obtained from Table II, by interpolation between  $\cosh (.5 + 1.1j)$  and  $\cosh (.5 + 1.2j)$ ; hence

$$\bar{e} = 460 + 475j = e_1(\cos \theta + j \sin \theta),$$

where  $\log \tan \theta = \log 475 - \log 460 = .0139$ ,  $\theta = 45^\circ 55'$ , and  $e_1 = 460 \sec \theta = 625.9$  volts, the required E.M.F.

Similarly  $\sinh (.5 + 20j) = \sinh (.5 + 1.15j) = .2126 + 1.0280j$ , and hence

$$\bar{i} = \frac{200}{1601}(100 + j)(.2126 + 1.028j) = \frac{1}{1601}(4046 + 2060j)$$

$$= i_1(\cos \theta' + j \sin \theta'),$$

where  $\log \tan \theta' = 9.70684$ ,  $\theta' = 26^\circ 59'$ ,  $i_1 = 4046 \sec \theta' / 1601 = 2.77$  amperes, the phase and magnitude of required current.

Next let it be required to find  $e$  at  $x = 8$ ; then

$$\bar{e} = 1000 \cosh (.04 + 1.6j) = 1000j \sinh (.04 + .03j),$$

by subtracting  $\frac{1}{2}\pi j$ , and applying Prob. 89. Interpolation between  $\sinh (0 + 0j)$  and  $\sinh (0 + .1j)$  gives

$$\sinh (0 + .03j) = 00000 + .02995j.$$

Similarly  $\sinh (.1 + .03j) = .10004 + .03004j$ .

Interpolation between the last two gives

$$\sinh (.04 + .03j) = .04002 + .02999j.$$

Hence  $\bar{e} = j(40.02 + 29.99j) = -29.99 + 40.02j = e_1(\cos \theta + j \sin \theta)$ , where

$\log \tan \theta = .12530$ ,  $\theta = 126^\circ 51'$ ,  $e_1 = -29.99 \sec 126^\circ 51' = 50.01$  volts.

Again, let it be required to find  $e$  at  $x = 16$ ; here

$$\bar{e} = 1000 \cosh (.08 + 3.2j) = -1000 \cosh (.08 + .06j),$$

but  $\cosh (0 + .06j) = .9970 + 0j$ ,  $\cosh (.1 + .06j) = 1.0020 + .006j$ ;

hence  $\cosh (.08 + .06j) = 1.0010 + .0048j$ ;

and  $\bar{e} = -1001 + 4.8j = e_1(\cos \theta + j \sin \theta)$ ,

where  $\theta = 180^\circ 17'$ ,  $e_1 = 1001$  volts. Thus at a distance of about 16 miles the E.M.F. is the same as at the receiver, but in opposite

phase. Since  $\bar{e}$  is proportional to  $\cosh (.005 + .2j)x$ , the value of  $x$  for which the phase is exactly  $180^\circ$  is  $\pi/.2 = 15.7$ . Similarly the phase of the E.M.F. at  $x = 7.85$  is  $90^\circ$ . There is agreement in phase at any two points whose distance apart is 31.4 miles.

In conclusion take the more general terminal conditions in which the line feeds into a receiver circuit, and suppose the current is to be kept at 50 amperes, in a phase  $40^\circ$  in advance of the electromotive force; then  $\bar{I} = 50(\cos 40^\circ + j \sin 40^\circ) = 38.30 + 32.14j$ ; and substituting the constants in (70) gives

$$\begin{aligned}\bar{e} &= 1000 \cosh (.005 + .2j)x + (7821 + 6236j) \sinh (.005 + .2j)x \\ &= 460 + 475j - 4748 + 9366j = -4288 + 9841j = e_1(\cos \theta + j \sin \theta),\end{aligned}$$

where  $\theta = 113^\circ 33'$ ,  $e_1 = 10730$  volts, the E.M.F. at sending end. This is 17 times what was required when the other end was insulated.

Prob. 107. If the receiving end be grounded, that is if  $\mathcal{E} = 0$ ; and if a current of 10 amperes be caused to flow to ground; find the E.M.F. and current to be kept up at the generator. Also compute these quantities, and their phases, at the distances 7.85, 15.7, 31.42, 94.25 miles from the receiver.

Prob. 108. If self-induction and capacity be zero, and the receiving end be insulated, show that the graph of the electromotive force is a catenary.

Prob. 109. Neglecting leakage and capacity, prove that the solution of equations (66) is  $\bar{i} = \bar{I}$ ,  $\bar{e} = \bar{E} + (R + j\omega L)\bar{I}x$ .

Prob. 110. If  $x$  be measured from the sending end, show how equations (65), (66) are to be modified; and prove that

$$\bar{e} = \bar{E}_0 \cosh mx - m_1 \bar{I}_0 \sinh mx, \quad \bar{i} = I_0 \cosh mx - \frac{1}{m_1} \bar{E}_0 \sinh mx,$$

where  $\bar{E}_0$ ,  $\bar{I}_0$  refer to the sending end.

### ART. 38. MISCELLANEOUS APPLICATIONS.

1. The length of the arc of the logarithmic curve  $y = a^x$  is  $s = \frac{1}{2}(\cosh u + \log \tanh \frac{1}{2}u)$ , in which  $M = 1/\log a$ ,  $\sinh u = y/M$ .

2. The length of arc of the spiral of Archimedes  $r = a^\theta$  is  $s = \frac{1}{4}a(\sinh 2u + 2u)$ , where  $\sinh u = \theta$ .

3. In the hyperbola  $x^2/a^2 - y^2/b^2 = 1$  the radius of curvature is  $\rho = (a^2 \sinh^2 u + b^2 \cosh^2 u)^{3/2}/ab$ ; in which  $u$  is the measure of the sector  $AOP$ , i.e.  $\cosh u = x/a$ ,  $\sinh u = y/b$ .

4. In an oblate spheroid, the superficial area of the zone

between the equator and a parallel plane at a distance  $y$  is  $S = \pi b^2(\sinh 2u + 2u)/2e$ , wherein  $b$  is the axial radius,  $e$  the eccentricity,  $u = ey/p$ , and  $p$  parameter of generating ellipse.

5. The length of the arc of the parabola  $y^2 = 2px$ , measured from the vertex of the curve, is  $l = \frac{1}{2}p(\sinh 2u + 2u)$ , in which  $\sinh u = y/p = \tan \phi$ , where  $\phi$  is the inclination of the terminal tangent to the initial one.

6. The centre of gravity of this arc is given by

$$3l\bar{x} = p^2(\cosh^3 u - 1), \quad 64l\bar{y} = p^2(\sinh 4u - 4u);$$

and the surface of a paraboloid of revolution is  $S = 2\pi y l$ .

7. The moment of inertia of the same arc about its terminal ordinate is  $I = \mu[xl(x - 2\bar{x}) + \frac{1}{64}p^3N]$ , where  $\mu$  is the mass of unit length, and

$$N = u - \frac{1}{4}\sinh 2u - \frac{1}{4}\sinh 4u + \frac{1}{12}\sinh 6u.$$

8. The centre of gravity of the arc of a catenary measured from the lowest point is given by

$$4l\bar{y} = c^2(\sinh 2u + 2u), \quad lx = c^2(u \sinh u - \cosh u + 1),$$

in which  $u = x/c$ ; and the moment of inertia of this arc about its terminal abscissa is

$$I = \mu c^3(\frac{1}{12}\sinh 3u + \frac{3}{4}\sinh u - u \cosh u).$$

9. Applications to the vibrations of bars are given in Rayleigh, *Theory of Sound*, Vol. I, art. 170; to the torsion of prisms in Love, *Elasticity*, pp. 166-74; to the flow of heat and electricity in Byerly, *Fourier Series*, pp. 75-81; to wave motion in fluids in Rayleigh, Vol. I, Appendix, p. 477, and in Bassett, *Hydrodynamics*, arts. 120, 384; to the theory of potential in Byerly p. 135, and in Maxwell, *Electricity*, arts. 172-4; to Non-Euclidian geometry and many other subjects in Günther, *Hyperbelfunktionen*, Chaps. V and VI. Several numerical examples are worked out in Laisant, *Essai sur les fonctions hyperboliques*.

## ART. 39. EXPLANATION OF TABLES.

In Table I the numerical values of the hyperbolic functions  $\sinh u$ ,  $\cosh u$ ,  $\tanh u$  are tabulated for values of  $u$  increasing from 0 to 4 at intervals of .02. When  $u$  exceeds 4, Table IV may be used.

Table II gives hyperbolic functions of complex arguments, in which

$$\cosh (x \pm iy) = a \pm ib, \quad \sinh (x \pm iy) = c \pm id,$$

and the values of  $a$ ,  $b$ ,  $c$ ,  $d$  are tabulated for values of  $x$  and of  $y$  ranging separately from 0 to 1.5 at intervals of .1. When interpolation is necessary it may be performed in three stages. For example, to find  $\cosh (.82 + 1.34i)$ : First find  $\cosh (.82 + 1.3i)$ , by keeping  $y$  at 1.3 and interpolating between the entries under  $x = .8$  and  $x = .9$ ; next find  $\cosh (.82 + 1.4i)$ , by keeping  $y$  at 1.4 and interpolating between the entries under  $x = .8$  and  $x = .9$ , as before; then by interpolation between  $\cosh (.82 + 1.3i)$  and  $\cosh (.82 + 1.4i)$  find  $\cosh (.82 + 1.34i)$ , in which  $x$  is kept at .82. The table is available for all values of  $y$ , however great, by means of the formulas

$$\sinh (x + 2i\pi) = \sinh x, \quad \cosh (x + 2i\pi) = \cosh x, \text{ etc.}$$

It does not apply when  $x$  is greater than 1.5, but this case seldom occurs in practice. This table can also be used as a complex table of circular functions, for

$$\cos (y \pm ix) = a \mp ib, \quad \sin (y \pm ix) = d \pm ic;$$

and, moreover, the exponential function is given by

$$\exp (\pm x \pm iy) = a \pm c \pm i(b \pm d),$$

in which the signs of  $c$  and  $d$  are to be taken the same as the sign of  $x$ , and the sign of  $i$  on the right is to be the product of the signs of  $x$  and of  $i$  on the left.

Table III gives the values of  $v = \operatorname{gd} u$ , and of the guderanian angle  $\theta = 180^\circ v/\pi$ , as  $u$  changes from 0 to 1 at inter-

vals of .02, from 1 to 2 at intervals of .05, and from 2 to 4 at intervals of .1.

In Table IV are given the values of  $\text{gd } u$ ,  $\log \sinh u$ ,  $\log \cosh u$ , as  $u$  increases from 4 to 6 at intervals of .1, from 6 to 7 at intervals of .2, and from 7 to 9 at intervals of .5.

In the rare cases in which more extensive tables are necessary, reference may be made to the tables\* of Gudermann, Glaisher, and Geipel and Kilgour. In the first the Gudermanian angle (written  $k$ ) is taken as the independent variable, and increases from 0 to 100 grades at intervals of .01, the corresponding value of  $u$  (written  $Lk$ ) being tabulated. In the usual case, in which the table is entered with the value of  $u$ , it gives by interpolation the value of the gudermanian angle, whose circular functions would then give the hyperbolic functions of  $u$ . When  $u$  is large, this angle is so nearly right that interpolation is not reliable. To remedy this inconvenience Gudermann's second table gives directly  $\log \sinh u$ ,  $\log \cosh u$ ,  $\log \tanh u$ , to nine figures, for values of  $u$  varying by .001 from 2 to 5, and by .01 from 5 to 12.

Glaisher has tabulated the values of  $e^x$  and  $e^{-x}$ , to nine significant figures, as  $x$  varies by .001 from 0 to .1, by .01 from 0 to 2, by .1 from 0 to 10, and by 1 from 0 to 500. From these the values of  $\cosh x$ ,  $\sinh x$  are easily obtained.

Geipel and Kilgour's handbook gives the values of  $\cosh x$ ,  $\sinh x$ , to seven figures, as  $x$  varies by .01 from 0 to 4.

There are also extensive tables by Forti, Gronau, Vassal, Callet, and Hoüel; and there are four-place tables in Byerly's Fourier Series, and in Wheeler's Trigonometry.

In the following tables a dash over a final digit indicates that the number has been increased.

\* Gudermann in Crelle's Journal, vols. 6-9, 1831-2 (published separately under the title *Theorie der hyperbolischen Functionen*, Berlin, 1833). Glaisher in Cambridge Phil. Trans., vol. 13, 1881. Geipel and Kilgour's *Electrical Handbook*.

TABLE I.—HYPERBOLIC FUNCTIONS.

$u$ .	$\sinh u$ .	$\cosh u$ .	$\tanh u$ .	$u$ .	$\sinh u$ .	$\cosh u$ .	$\tanh u$ .
.00	.0000	1.0000	.0000	1.00	1.1752	1.5431	.7616
.02	.0200	1.0020	.0200	1.02	1.2063	1.5669	.7699
.04	.0400	1.0008	.0400	1.04	1.2379	1.5913	.7779
.06	.0600	1.0018	.0599	1.06	1.2700	1.6164	.7857
.08	.0801	1.0032	.0798	1.08	1.3025	1.6421	.7932
.10	.1002	1.0050	.0997	1.10	1.3356	1.6685	.8005
.12	.1203	1.0072	.1194	1.12	1.3693	1.6956	.8076
.14	.1405	1.0098	.1391	1.14	1.4035	1.7233	.8144
.16	.1607	1.0128	.1586	1.16	1.4382	1.7517	.8210
.18	.1810	1.0162	.1781	1.18	1.4735	1.7808	.8275
.20	.2013	1.0201	.1974	1.20	1.5095	1.8107	.8337
.22	.2218	1.0243	.2165	1.22	1.5460	1.8412	.8397
.24	.2423	1.0289	.2355	1.24	1.5831	1.8725	.8455
.26	.2629	1.0340	.2543	1.26	1.6209	1.9045	.8511
.28	.2837	1.0395	.2729	1.28	1.6593	1.9373	.8565
.30	.3045	1.0453	.2913	1.30	1.6984	1.9709	.8617
.32	.3255	1.0516	.3095	1.32	1.7381	2.0053	.8668
.34	.3466	1.0584	.3275	1.34	1.7786	2.0404	.8717
.36	.3678	1.0655	.3452	1.36	1.8198	2.0764	.8764
.38	.3892	1.0731	.3627	1.38	1.8617	2.1132	.8810
.40	.4108	1.0811	.3799	1.40	1.9043	2.1509	.8854
.42	.4325	1.0895	.3969	1.42	1.9477	2.1894	.8896
.44	.4543	1.0984	.4136	1.44	1.9919	2.2288	.8937
.46	.4764	1.1077	.4301	1.46	2.0369	2.2691	.8977
.48	.4986	1.1174	.4462	1.48	2.0827	2.3103	.9015
.50	.5211	1.1276	.4621	1.50	2.1293	2.3524	.9051
.52	.5438	1.1383	.4777	1.52	2.1768	2.3955	.9087
.54	.5666	1.1494	.4930	1.54	2.2251	2.4395	.9121
.56	.5897	1.1609	.5080	1.56	2.2743	2.4845	.9154
.58	.6131	1.1730	.5227	1.58	2.3245	2.5305	.9186
.60	.6367	1.1855	.5370	1.60	2.3756	2.5775	.9217
.62	.6605	1.1984	.5511	1.62	2.4276	2.6255	.9246
.64	.6846	1.2119	.5649	1.64	2.4806	2.6746	.9275
.66	.7090	1.2258	.5784	1.66	2.5346	2.7247	.9302
.68	.7336	1.2402	.5915	1.68	2.5896	2.7760	.9329
.70	.7586	1.2552	.6044	1.70	2.6456	2.8283	.9354
.72	.7838	1.2706	.6169	1.72	2.7027	2.8818	.9379
.74	.8094	1.2865	.6291	1.74	2.7609	2.9364	.9402
.76	.8353	1.3030	.6411	1.76	2.8202	2.9922	.9425
.78	.8615	1.3199	.6527	1.78	2.8806	3.0492	.9447
.80	.8881	1.3374	.6640	1.80	2.9422	3.1075	.9468
.82	.9150	1.3555	.6751	1.82	3.0049	3.1669	.9488
.84	.9423	1.3740	.6858	1.84	3.0689	3.2277	.9508
.86	.9700	1.3932	.6963	1.86	3.1340	3.2897	.9527
.88	.9981	1.4128	.7064	1.88	3.2005	3.3530	.9545
.90	1.0265	1.4331	.7165	1.90	3.2682	3.4177	.9562
.92	1.0554	1.4539	.7259	1.92	3.3372	3.4838	.9579
.94	1.0847	1.4753	.7352	1.94	3.4075	3.5512	.9595
.96	1.1144	1.4973	.7443	1.96	3.4792	3.6201	.9611
.98	1.1446	1.5199	.7531	1.98	3.5523	3.6904	.9626



TABLE I. HYPERBOLIC FUNCTIONS.

$u$ .	$\sinh u$ .	$\cosh u$ .	$\tanh u$ .	$u$ .	$\sinh u$ .	$\cosh u$ .	$\tanh u$ .
2.00	3.6269	3.7622	.9640	3.00	10.0179	10.0677	.99505
2.02	3.7028	3.8355	.9654	3.02	10.2212	10.2700	.99524
2.04	3.7803	3.9103	.9667	3.04	10.4287	10.4765	.99543
2.06	3.8593	3.9867	.9680	3.06	10.6403	10.6872	.99561
2.08	3.9398	4.0647	.9693	3.08	10.8562	10.9022	.99578
2.10	4.0219	4.1443	.9705	3.10	11.0765	11.1215	.99594
2.12	4.1056	4.2256	.9716	3.12	11.3011	11.3453	.99610
2.14	4.1909	4.3085	.9727	3.14	11.5303	11.5736	.99626
2.16	4.2779	4.3932	.9737	3.16	11.7641	11.8065	.99640
2.18	4.3666	4.4797	.9748	3.18	12.0026	12.0442	.99654
2.20	4.4571	4.5679	.9757	3.20	12.2459	12.2866	.99668
2.22	4.5494	4.6580	.9767	3.22	12.4941	12.5340	.99681
2.24	4.6434	4.7499	.9776	3.24	12.7473	12.7864	.99693
2.26	4.7394	4.8437	.9785	3.26	13.0056	13.0440	.99705
2.28	4.8372	4.9395	.9793	3.28	13.2691	13.3067	.99717
2.30	4.9370	5.0372	.9801	3.30	13.5379	13.5748	.99728
2.32	5.0387	5.1370	.9809	3.32	13.8121	13.8483	.99738
2.34	5.1425	5.2388	.9816	3.34	14.0918	14.1273	.99749
2.36	5.2483	5.3427	.9823	3.36	14.3772	14.4120	.99758
2.38	5.3562	5.4487	.9830	3.38	14.6684	14.7024	.99768
2.40	5.4662	5.5569	.9837	3.40	14.9654	14.9987	.99777
2.42	5.5785	5.6674	.9843	3.42	15.2684	15.3011	.99786
2.44	5.6929	5.7801	.9849	3.44	15.5774	15.6095	.99794
2.46	5.8097	5.8951	.9855	3.46	15.8928	15.9242	.99802
2.48	5.9288	6.0125	.9861	3.48	16.2144	16.2453	.99810
2.50	6.0502	6.1323	.9866	3.50	16.5426	16.5728	.99817
2.52	6.1741	6.2545	.9871	3.52	16.8774	16.9070	.99824
2.54	6.3004	6.3793	.9876	3.54	17.2190	17.2480	.99831
2.56	6.4293	6.5066	.9881	3.56	17.5674	17.5958	.99838
2.58	6.5607	6.6364	.9886	3.58	17.9228	17.9507	.99844
2.60	6.6947	6.7690	.9890	3.60	18.2854	18.3128	.99850
2.62	6.8315	6.9043	.9895	3.62	18.6554	18.6822	.99856
2.64	6.9709	7.0423	.9899	3.64	19.0328	19.0590	.99862
2.66	7.1132	7.1832	.9903	3.66	19.4178	19.4435	.99867
2.68	7.2583	7.3268	.9906	3.68	19.8106	19.8358	.99872
2.70	7.4063	7.4735	.9910	3.70	20.2113	20.2360	.99877
2.72	7.5572	7.6231	.9914	3.72	20.6201	20.6443	.99882
2.74	7.7112	7.7758	.9917	3.74	21.0371	21.0609	.99887
2.76	7.8683	7.9316	.9920	3.76	21.4626	21.4859	.99891
2.78	8.0285	8.0905	.9923	3.78	21.8966	21.9194	.99896
2.80	8.1919	8.2527	.9926	3.80	22.3394	22.3618	.99900
2.82	8.3586	8.4182	.9929	3.82	22.7911	22.8131	.99904
2.84	8.5287	8.5871	.9932	3.84	23.2520	23.2735	.99907
2.86	8.7021	8.7594	.9935	3.86	23.7221	23.7432	.99911
2.88	8.8791	8.9352	.9937	3.88	24.2018	24.2224	.99915
2.90	9.0596	9.1146	.9940	3.90	24.6911	24.7113	.99918
2.92	9.2437	9.2976	.9942	3.92	25.1903	25.2101	.99921
2.94	9.4315	9.4844	.9944	3.94	25.6996	25.7190	.99924
2.96	9.6231	9.6749	.9947	3.96	26.2191	26.2382	.99927
2.98	9.8185	9.8693	.9949	3.98	26.7492	26.7679	.99930

TABLE II. VALUES OF COSH ( $x + iy$ ) AND SINH ( $x + iy$ ).

$y$	$x = 0$				$x = .1$			
	$a$	$b$	$c$	$d$	$u$	$b$	$c$	$d$
0	1.0000	0000	0000	.0000	1.0050	.00000	.10017	.0000
.1	0.9950	“	“	.0998	1.0000	01000	.09967	1000
.2	0.9801	“	“	.1987	0.9850	01990	.09817	1997
.3	0.9553	“	“	.2955	0.9601	02960	.09570	2970
.4	.9211	“	“	.3894	.9257	.03901	.09236	.3914
.5	8776	“	“	4794	8830	04802	08791	4818
.6	8253	“	“	5646	8295	05656	08267	5675
.7	7648	“	“	6442	7687	06453	07661	6474
.8	.6967	“	“	.7174	.7002	.07186	.06979	.7200
.9	6216	“	“	7833	6247	07847	06227	7872
1.0	5403	“	“	8415	5430	08429	05412	8457
1.1	4536	“	“	8912	4559	08927	04544	8957
1.2	.3624	“	“	.9320	.3642	.09336	.03630	0.9367
1.3	2675	“	“	9636	2688	09652	02680	0.9684
1.4	1700	“	“	9854	1708	09871	01703	0.9904
1.5	0707	“	“	9975	0711	09992	00709	1.0025
$\frac{1}{2}\pi$	0000	“	“	1.0000	0000	10017	00000	1.0050
$y$	$x = .4$				$x = .5$			
	$a$	$b$	$c$	$d$	$u$	$b$	$c$	$d$
0	1.0811	.0000	.4108	.0000	1.1276	.0000	.5211	.0000
.1	1.0756	0410	4087	1079	1.1220	0520	5185	1126
.2	1.0595	0816	4026	2148	1.1051	1025	5107	2240
.3	1.0328	1214	3924	3195	1.0773	1540	4978	3332
.4	.9957	.1600	.3783	.4210	1.0386	.2029	.4800	.4391
.5	9487	1969	3605	5183	0.9896	2498	4573	5406
.6	8922	2319	3390	6104	0.9306	2942	4301	6367
.7	8268	2646	3142	6964	0.8624	3357	3986	7264
.8	.7532	.2947	.2862	.7755	.7856	.3738	.3631	0.8089
.9	6720	3218	2553	8468	7009	4082	3239	0.8833
1.0	5841	3456	2219	9097	6093	4385	2815	0.9439
1.1	4904	3661	1863	9635	5115	4644	2364	1.0050
1.2	.3917	.3829	.1488	1.0076	.4086	.4857	.1888	1.0510
1.3	2892	3958	1099	1.0417	3016	5021	1394	1.0865
1.4	1838	4048	0698	1.0653	1917	5135	0886	1.1163
1.5	0765	4097	0291	1.0784	0798	5198	0369	1.1248
$\frac{1}{2}\pi$	0000	4108	0000	1.0811	0000	5211	0000	1.1276

TABLE II. VALUES OF COSH ( $x + iy$ ) AND SINH ( $x + iy$ ).

$x = .2$				$x = .3$				$y$
$a$	$b$	$c$	$d$	$a$	$b$	$c$	$d$	
1.0201	.0000	.2013	.0000	1.0453	.0000	.3045	.0000	0
1.0150	0201	2003	1018	1.0401	0304	3030	1044	.1
0.9997	0400	1973	2027	1.0245	0605	2985	2077	.2
0.9745	0595	1923	3014	9987	0900	2909	3089	.3
.9395	.0784	.1854	.3972	.9628	.1186	.2805	.4071	.4
8952	0965	1767	4890	9174	1460	2672	5012	.5
8419	1137	1662	5760	8627	1719	2513	5903	.6
7802	1297	1540	6571	7995	1962	2329	6734	.7
.7107	.1444	.1403	.7318	.7283	.2184	.2122	.7498	.8
6341	1577	1252	7990	6498	2385	1893	8188	.9
5511	1694	1088	8584	5648	2562	1645	8796	1.0
4627	1795	0913	9091	4742	2714	1381	9316	1.1
.3696	.1877	.0730	0.9507	.3788	.2838	.1103	0.9743	1.2
2729	1940	0539	0.9829	2796	2934	0815	1.0072	1.3
1734	1984	0342	1.0052	1777	3001	0518	1.0301	1.4
0722	2008	0142	1.0175	0739	3038	0215	1.0427	1.5
0000	2013	0000	1.0201	0000	3045	0000	1.0453	$\frac{1}{2}\pi$
$x = .6$				$x = .7$				$y$
$a$	$b$	$c$	$d$	$a$	$b$	$c$	$d$	
1.1855	.0000	.6367	.0000	1.2552	.0000	.7586	.0000	0
1.1795	0636	6335	1183	1.2489	0757	7548	1253	.1
1.1618	1265	6240	2355	1.2301	1542	7435	2494	.2
1.1325	1881	6082	3503	1.1991	2242	7247	3709	.3
1.0918	.2479	.5864	.4617	1.1561	.2954	.6987	.4888	.4
1.0403	3052	5587	5684	1.1015	3637	6657	6018	.5
0.9784	3595	5255	6694	1.0359	4253	6261	7087	.6
0.9067	4101	4869	7637	0.9600	4887	5803	8086	.7
.8259	.4567	.4436	0.8504	.8745	.5442	.5285	0.9004	.8
7369	4987	3957	0.9286	7802	5942	4715	0.9832	.9
6405	5357	3440	0.9975	6782	6383	4099	1.0562	1.0
5377	5674	2888	1.0565	5693	6760	3441	1.1186	1.1
.4296	.5934	.2307	1.1049	.4548	.7070	.2749	1.1699	1.2
3171	6135	1703	1.1422	3358	7309	2029	1.2094	1.3
2015	6274	1082	1.1682	2133	7475	1289	1.2369	1.4
0839	6351	0450	1.1835	0888	7567	0537	1.2520	1.5
0000	6367	0000	1.1855	0000	7586	0000	1.2552	$\frac{1}{2}\pi$

TABLE II. VALUES OF COSH ( $x + iy$ ) AND SINH ( $x + iy$ ).

$y$	$x = .8$				$x = .9$			
	$a$	$b$	$c$	$d$	$a$	$b$	$c$	$d$
0	1.3374	.0000	.8881	.0000	1.4331	.0000	1.0265	.0000
.1	1.3305	0887	8837	1335	1.4259	1025	1.0214	1431
.2	1.3108	1764	8704	2657	1.4045	2039	1.0061	2847
.3	1.2776	2625	8484	3952	1.3691	3034	0.9807	4235
.4	1.2319	.3458	.8180	.5208	1.3200	.3997	.9455	.5581
.5	1.1737	4258	7794	6412	1.2577	4921	9008	6871
.6	1.1038	5015	7330	7552	1.1828	5796	8472	8092
.7	1.0229	5721	6793	8616	1.0961	6613	7851	9232
.8	.9318	.6371	.6198	0.9595	.9984	.7364	.7152	1.0280
.9	8314	6957	5521	1.0476	8908	8041	6381	1.1226
1.0	7226	7472	4798	1.1254	7743	8638	5546	1.2059
1.1	6067	7915	4028	1.1919	6500	9148	4656	1.2772
1.2	.4846	.8278	.3218	1.2465	.5193	0.9568	.3720	1.3357
1.3	3578	8557	2376	1.2887	3834	0.9891	2746	1.3809
1.4	2273	8752	1510	1.3180	2436	1.0124	1745	1.4122
1.5	0946	8859	0628	1.3341	1014	1.0239	0726	1.4295
$\frac{1}{2}\pi$	0000	.8881	0000	1.3374	0000	1.0265	0000	1.4331
$y$	$x = 1.2$				$x = 1.3$			
	$a$	$b$	$c$	$d$	$a$	$b$	$c$	$d$
0	1.8107	.0000	1.5095	.0000	1.9709	.0000	1.6984	.0000
.1	1.8016	1507	1.5019	1808	1.9611	1696	1.6899	1968
.2	1.7746	2999	1.4794	3598	1.9316	3374	1.6645	3916
.3	1.7298	4461	1.4420	5351	1.8829	5019	1.6225	5824
.4	1.6677	.5878	1.3903	0.7051	1.8153	.6614	1.5643	0.7675
.5	1.5890	7237	1.3247	0.8681	1.7296	8142	1.4905	0.9449
.6	1.4944	8523	1.2458	1.0224	1.6267	9590	1.4017	1.1131
.7	1.3849	9724	1.1545	1.1665	1.5074	1.0941	1.2990	1.2697
.8	1.2615	1.0828	1.0517	1.2989	1.3731	1.2183	1.1833	1.4139
.9	1.1255	1.1824	0.9333	1.4183	1.2251	1.3304	1.0557	1.5439
1.0	0.9783	1.2702	0.8156	1.5236	1.0649	1.4291	0.9176	1.6585
1.1	0.8213	1.3452	0.6847	1.6137	0.8940	1.5136	0.7704	1.7565
1.2	.6561	1.4069	.5470	1.6876	.7142	1.5830	.6154	1.8370
1.3	4844	1.4544	4038	1.7447	5272	1.6365	4543	1.8991
1.4	3078	1.4875	2566	1.7843	3350	1.6737	2887	1.9422
1.5	1281	1.5057	1068	1.8061	1394	1.6941	1201	1.9660
$\frac{1}{2}\pi$	0000	1.5095	0000	1.8107	0000	1.6984	0000	1.9709

TABLE II. VALUES OF COSH ( $x + iy$ ) AND SINH ( $x + iy$ )

$x = 1.0$				$x = 1.1$				$y$
$a$	$b$	$c$	$d$	$a$	$b$	$c$	$d$	
1.5431̄	.0000	1.1752	.0000	1.6685	.0000	1.3356	.0000	0
1.5354	1173	1.1693	1541̄	1.6602	1333	1.3290	1666	.1
1.5123	2335̄	1.1518	3066	1.6353	2654	1.3090	3315	.2
1.4742	3473̄	1.1227	4560	1.5940	3946	1.2760	4931̄	.3
1.4213	.4576̄	1.0824	.6009	1.5368	.5201	1.2302	0.6498̄	.4
1.3542	5634̄	1.0314	7398̄	1.4643	6403̄	1.1721	0.7999	.5
1.2736	6636̄	0.9699	8718	1.3771	7542̄	1.1024	0.9421̄	.6
1.1802	7571̄	0.8988	9941̄	1.2762	8604	1.0216	1.0749	.7
1.0751̄	0.8430	.8188̄	1.1069	1.1625̄	0.9581	.9306̄	1.1969	.8
0.9592	0.9206	7305	1.2087	1.0372̄	1.0462	8302̄	1.3070	.9
0.8337	0.9889	6350̄	1.2985̄	0.9015	1.1239	7217̄	1.4040	1.0
0.6999	1.0473	5331̄	1.3752̄	0.7568	1.1903	6058	1.4870̄	1.1
.5592̄	1.0953	.4258	1.4382	.6046	1.2449̄	.4840̄	1.5551	1.2
4128	1.1324̄	3144̄	1.4869̄	4463	1.2870̄	3573̄	1.6077	1.3
2623̄	1.1581̄	1998̄	1.5213	2836	1.3162	2270	1.6442̄	1.4
1092̄	1.1723̄	0831̄	1.5392̄	1180	1.3323̄	0945̄	1.6643̄	1.5
0000	1.1752	0000	1.5431̄	0000	1.3356	0000	1.6685	$\frac{1}{2}\pi$
$x = 1.4$				$x = 1.5$				$y$
$a$	$b$	$c$	$d$	$a$	$b$	$c$	$d$	
2.1509̄	.0000	1.9043	.0000	2.3524	.0000	2.1293̄	.0000	0
2.1401	1901	1.8948	2147	2.3413	2126	2.1187	2348	.1
2.1080	3783	1.8663	4273	2.3055	4230	2.0868	4674	.2
2.0548	5628̄	1.8192	6356	2.2473	6292	2.0342̄	6951	.3
1.9811	0.7416̄	1.7540	0.8376	2.1667	0.8292̄	1.9612̄	0.9161̄	.4
1.8876̄	0.9130	1.6712̄	1.0312̄	2.0644	1.0208	1.8686̄	1.1278	.5
1.7752̄	1.0753̄	1.5713̄	1.2145̄	1.9415	1.2023	1.7574̄	1.3283̄	.6
1.6451	1.2268	1.4565	1.3856	1.7992	1.3717	1.6286̄	1.5155̄	.7
1.4985	1.3661	1.3268̄	1.5430̄	1.6389	1.5275̄	1.4835̄	1.6875	.8
1.3370	1.4917	1.1838̄	1.6849	1.4623̄	1.6679	1.3236̄	1.8427̄	.9
1.1622̄	1.6024̄	1.0289	1.8099	1.2710	1.7917	1.1505̄	1.9795̄	1.0
0.9756	1.6971	0.8638	1.9168	1.0671̄	1.8976	0.9659̄	2.0965̄	1.1
.7794	1.7749̄	.6900	2.0047	.8524	1.9846̄	.7716̄	2.1925	1.2
5754	1.8349	5094	2.0725	6293̄	2.0517	5696̄	2.2667̄	1.3
3656̄	1.8766̄	3237̄	2.1196	3998	2.0983	3619	2.3182̄	1.4
1523̄	1.8996	1347̄	2.1455	1664	2.1239	1506	2.3465	1.5
.0000	1.9043	0000	2.1509̄	.0000	2.1293̄	.0000	2.3524	$\frac{1}{2}\pi$

TABLE III.

$u$	gd $u$	$\theta^\circ$	$u$	gd $u$	$\theta^\circ$	$u$	gd $u$	$\theta^\circ$
.00	.0000	0.000	.60	.5669	32.483	1.50	1.1317	64.843
.02	0200	1.146	.62	5837	33.444	1.55	1.1525	66.084
.04	0400	2.291	.64	6003	34.395	1.60	1.1724	67.171
.06	0600	3.436	.66	6167	35.336	1.65	1.1913	68.257
.08	0799	0.579	.68	6329	36.265	1.70	1.2094	69.294
.10	.0998	5.720	.70	.6489	37.183	1.75	1.2267	70.284
.12	1197	6.859	.72	6648	38.091	1.80	1.2432	71.228
.14	1395	7.995	.74	6804	38.987	1.85	1.2589	72.128
.16	1593	9.128	.76	6958	39.872	1.90	1.2739	72.987
.18	1790	10.258	.78	7111	40.746	1.95	1.2881	73.805
.20	.1987	11.384	.80	.7261	41.608	2.00	1.3017	74.584
.22	2183	12.505	.82	7410	42.460	2.10	1.3271	76.037
.24	2377	13.621	.84	7557	43.299	2.20	1.3501	77.354
.26	2571	14.732	.86	7702	44.128	2.30	1.3710	78.549
.28	2764	15.837	.88	7844	44.944	2.40	1.3899	79.633
.30	.2956	16.937	.90	.7985	45.750	2.50	1.4070	80.615
.32	3147	18.030	.92	8123	46.544	2.60	1.4227	81.513
.34	3336	19.116	.94	8260	47.326	2.70	1.4366	82.310
.36	3525	20.195	.96	8394	48.097	2.80	1.4493	83.040
.38	3712	21.267	.98	8528	48.857	2.90	1.4609	83.707
.40	.3897	22.331	1.00	.8658	49.605	3.00	1.4713	84.301
.42	4082	23.386	1.05	8976	51.428	3.10	1.4808	84.841
.44	4264	24.434	1.10	9281	53.178	3.20	1.4894	85.336
.46	4446	25.473	1.15	9575	54.860	3.30	1.4971	85.775
.48	4626	26.503	1.20	9857	56.476	3.40	1.5041	86.177
.50	.4804	27.524	1.25	1.0127	58.026	3.50	1.5104	86.541
.52	4980	28.535	1.30	1.0387	59.511	3.60	1.5162	86.870
.54	5155	29.537	1.35	1.0635	60.933	3.70	1.5214	87.168
.56	5328	30.529	1.40	1.0873	62.295	3.80	1.5261	87.437
.58	5500	31.511	1.45	1.1100	63.598	3.90	1.5303	87.681

TABLE IV.

$u$	gd $u$	log sinh $u$	log cosh $u$	$u$	gd $u$	log sinh $u$	log cosh $u$
4.0	1.5342	1.4360	1.4363	5.5	1.5626	2.08758	2.08760
4.1	1.5377	1.4795	1.4797	5.6	1.5634	2.13101	2.13103
4.2	1.5408	1.5229	1.5231	5.7	1.5641	2.17444	2.17445
4.3	1.5437	1.5664	1.5665	5.8	1.5648	2.21787	2.21788
4.4	1.5462	1.6098	1.6099	5.9	1.5653	2.26130	2.26131
4.5	1.5486	1.6532	1.6533	6.0	1.5658	2.30473	2.30474
4.6	1.5507	1.6967	1.6968	6.2	1.5667	2.39159	2.39160
4.7	1.5526	1.7401	1.7402	6.4	1.5675	2.47845	2.47846
4.8	1.5543	1.7836	1.7836	6.6	1.5681	2.56531	2.56531
4.9	1.5559	1.8270	1.8270	6.8	1.5686	2.65217	2.65217
5.0	1.5573	1.8704	1.8705	7.0	1.5690	2.73903	2.73903
5.1	1.5586	1.9139	1.9139	7.5	1.5697	2.95618	2.95618
5.2	1.5598	1.9573	1.9573	8.0	1.5701	3.17333	3.17333
5.3	1.5608	2.0007	2.0007	8.5	1.5704	3.39047	3.39047
5.4	1.5618	2.0442	2.0442	9.0	1.5705	3.60762	3.60762
				$\infty$	1.5708	$\infty$	$\infty$