

	<h1 style="margin: 0;">LES OPÉRATIONS</h1> <p style="margin: 0;">(04)</p>
-----------------------------------------------------------------------------------	---------------------------------------------------------------------------

• Entoure le bon résultat :

<u>4 + 1</u>	<u>5 + 0</u>	<u>1 + 4</u>	<u>1 + 3</u>	<u>5 - 3</u>
3	3	5	1	1
<b>5</b>	4	6	3	2
4	5	0	4	8
<u>3 + 2</u>	<u>5 - 0</u>	<u>4 - 1</u>	<u>0 + 4</u>	<u>4 - 4</u>
5	3	2	0	8
4	4	3	2	4
3	5	4	4	0


• Entoure la bonne opération :

<u>5</u>	<u>5</u>	<u>5</u>	<u>5</u>	<u>5</u>
1 + 5	3 + 2	5 - 5	0 + 4	1 + 5
5 - 1	4 - 1	5 - 0	1 + 4	5 - 5
0 + 5	1 + 3	0 + 4	5 - 1	5 + 0
<u>5</u>	<u>5</u>	<u>5</u>	<u>5</u>	<u>5</u>
5 - 5	4 + 1	4 - 3	1 + 2 + 1	10 - 10
4 + 0	1 + 1	5 - 3	2 + 1 + 2	10 - 5
2 + 3	4 - 1	0 + 5	2 + 0 + 2	5 - 5

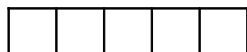
• Complète suivant les exemples :




**3 + 2 = 5**



4 + 1 = ...



2 + ... = 4



... + 5 = 5

$$\begin{array}{r} 3 \\ + 2 \\ \hline 5 \end{array}$$


$$\begin{array}{r} 4 \\ + 1 \\ \hline \dots \end{array}$$

$$\begin{array}{r} 2 \\ + \dots \\ \hline 4 \end{array}$$

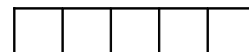
$$\begin{array}{r} \dots \\ + 5 \\ \hline 5 \end{array}$$




**5 - 1 = 4**



4 - 3 = ...



5 - ... = 0



... - 0 = 5

$$\begin{array}{r} 5 \\ - 1 \\ \hline 4 \end{array}$$

$$\begin{array}{r} 4 \\ - 3 \\ \hline \dots \end{array}$$

$$\begin{array}{r} 5 \\ - \dots \\ \hline 0 \end{array}$$

$$\begin{array}{r} \dots \\ - 0 \\ \hline 5 \end{array}$$